



日期：_____

成績：_____



寫出較適合用作表示以下各物件體積的單位： cm^3 或 m^3 。


1.



2.



3.



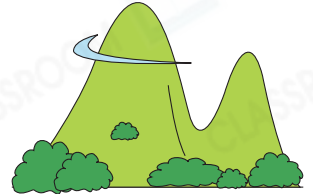
4.



5.



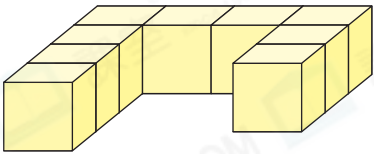
6.





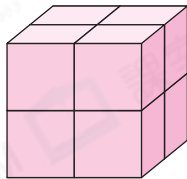
寫出下列各立體的體積。(每個數粒的體積是 1cm^3)

7.



_____ cm^3

8.



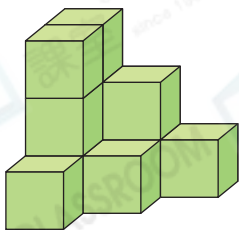
_____ cm^3

得分重點




準確數出數粒的數量，注意不要遺漏被遮擋的數粒。

9.



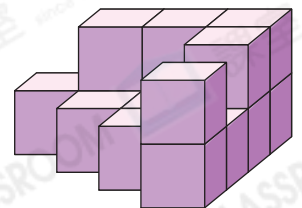
_____ cm^3

10.



_____ cm^3

11.



_____ cm^3

