

HONG KONG ATTAINMENT TEST Pre-Secondary One

香港學科測驗中一入學前

Mathematics

數學

Mock Paper 4

模擬試卷(四)

六年級下學期

題號	學習重點	範疇	題號	學習重點	範疇
1	多位數(5上)	數	23	容量和體積(6上)	度量
2	公倍數(4上)		24	速率(6下)	
3	整數乘法(4上)		25	速率(6下)	
4	整數四則混合計算(4下)		26	折線圖(6下)	數據處理
5	分數和小數的互化(6上)		27	折線圖(6下)	
6	因數(4上)		28	統計圖的應用(6下)	
7	分數除法(5下)		29	平均數(6上)	代數
8	小數減法(4下)		30	簡易方程(6下)	
9	分數加法(5上)		31(a)	軸對稱(6下)	圖形與空間
10	小數乘法(5下)		31(b)	軸對稱(6下)	
11	小數四則混合計算(6上)		32(a)	百分數的應用(6上)	數
12	百分數的應用(6上)		32(b)	周界(4下)	度量
13	百分數的應用(6上)		33(a)	分數四則混合計算(5下)	數
14	圖形拼砌(4上)		33(b)	面積(4下)	度量
15	軸對稱(6下)	圖形與空間	34(a)	代數式(5下)	代數
16	八個方向(4上)		34(b)	簡易方程(6下)	
17	八個方向(4上)		35(a)	複合棒形圖(5上)、 平均數(6上)	數據處理
18	軸對稱(6下)	度量	35(b)	複合棒形圖(5上)	度量
19	周界(4上)、圓周(6上)		36(a)	行程圖(6下)	
20	面積(4下)		36(b)	行程圖(6下)	
21	周界(4下)		36(c)	行程圖(6下)	
22	面積(4下)、圓面積(6上)				

Time allowed for the test: 50 minutes

測驗時間：50分鐘

Instructions:

1. This test contains two sections:
Section A: Questions 1-30
Section B: Questions 31-36
2. Answer ALL questions.
3. Write your answers on the answer sheet.
4. Write your name, class and class number on the answer sheet.
5. You may do your rough work in the blank space of this test booklet and there is no need to rub it out after the test.
6. The use of calculator is not allowed.

學生須知：

1. 本測驗卷共有兩部分：
甲部：第1至第30題
乙部：第31至第36題
2. 全部題目均須作答。
3. 把答案寫在答題紙上。
4. 在答題紙上填寫學生姓名、班別及學號。
5. 學生可利用本測驗卷的空白部分做算草，測驗完畢後無須將算草擦去。
6. 不准使用計算機。

Note:

Not all diagrams are drawn to scale.

注意：

部分附圖不依比例繪畫。

SECTION A (60 marks)

Choose the correct answer. You only need to write down the letter preceding the selected answer.

甲部 (60分)

選出正確的答案。學生只須填上所選答案前的英文字母。

1. A number is 4 000 000 when corrected to the nearest million and 3 500 000 when corrected to the nearest hundred thousand. Which of the following could be the possible number?

- A. 3 609 000
- B. 3 576 000
- C. 3 538 000
- D. 3 496 000

1. 一個數取近似值至百萬位是 4 000 000，取近似值至十萬位是 3 500 000。下列哪一項可能是該數？

- A. 3 609 000
- B. 3 576 000
- C. 3 538 000
- D. 3 496 000

2. What is the greatest common multiple of 14 and 21 within 100?

- A. 14
- B. 21

2. 在 100 以內，14 和 21 最大的公倍數是多少？

- C. 42
- D. 84

3. Louis saves \$29 every day. How much did he save from 9th Aug to 26th Aug?

- A. \$754
- B. \$551
- C. \$522
- D. \$493

3. 易文每天儲蓄 \$29。由 8 月 9 日至 8 月 26 日，他共儲蓄了多少？


- A. \$754
- B. \$551
- C. \$522
- D. \$493


4. The price of a toothbrush is \$21. One extra free toothbrush will be given when buying 4 toothbrushes. If Miss Chan only needs 22 toothbrushes, how much should she pay at least?

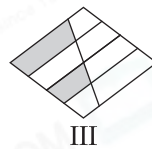
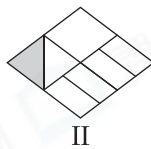
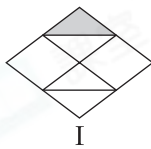
- A. \$378
- B. \$420
- C. \$441
- D. \$462

4. 一枝牙刷的售價是\$21。購買4枝牙刷可額外獲贈1枝。如果陳小姐只需要22枝牙刷，她最少須付多少？

- A. \$378
- B. \$420
- C. \$441
- D. \$462

5. If each  represents 1, which of the following figures has shaded part equal(s) to 0.125?

5. 如果每個  代表1，下列哪一個/些圖形的陰影部分是0.125？



- A. I only
- B. II only
- C. I and II only
- D. I, II and III

- A. 只有 I
- B. 只有 II
- C. 只有 I 及 II
- D. I、II 及 III

6. How many factors does 28 have?

- A. 3
- B. 4
- C. 5
- D. 6

6. 28 共有多少個因數？

- A. 3
- B. 4
- C. 5
- D. 6

7. There are $93\frac{3}{5}$ kg of rice. If every $2\frac{1}{10}$ kg of rice are packed into a bag, how many bags of rice can be packed at most?

- A. 44
- B. 45
- C. 46
- D. 47

7. 有米 $93\frac{3}{5}$ kg。如果每 $2\frac{1}{10}$ kg 包成一袋，最多可包成多少袋？

- A. 44
- B. 45
- C. 46
- D. 47

8. The following table shows the details of two pencil cases:

Pencil cases 筆袋	Length 長度	Weight 重量
A	21.3cm	42.03g
B	28cm	53.79g

What are the differences in length and weight between the two pencil cases respectively?

- | | <u>Length</u> | <u>Weight</u> |
|----|---------------|---------------|
| A. | 6.7cm | 11.76g |
| B. | 6.7cm | 11.86g |
| C. | 7.7cm | 11.76g |
| D. | 7.7cm | 11.86g |

8. 下表展示了兩個筆袋的資料：

這兩個筆袋的長度和重量分別相差多少？

- | | <u>長度</u> | <u>重量</u> |
|----|-----------|-----------|
| A. | 6.7cm | 11.76g |
| B. | 6.7cm | 11.86g |
| C. | 7.7cm | 11.76g |
| D. | 7.7cm | 11.86g |

9. May has savings of $\$105\frac{1}{2}$ which is $\$21\frac{4}{5}$ less than Joyce. How much savings do they have altogether?

- A. $\$127\frac{3}{10}$
- B. $\$189\frac{1}{5}$
- C. $\$210\frac{1}{10}$
- D. $\$232\frac{4}{5}$

9. 美芬有儲蓄 $\$105\frac{1}{2}$ ，比芝琳少 $\$21\frac{4}{5}$ ，兩人共有儲蓄多少？

- A. $\$127\frac{3}{10}$
- B. $\$189\frac{1}{5}$
- C. $\$210\frac{1}{10}$
- D. $\$232\frac{4}{5}$

10. Which of the following has the largest value?

- A. 252×0.57
- B. 256×0.51
- C. 25.2×57
- D. 25.6×51

10. 下列哪一項的值最大？

- A. 252×0.57
- B. 256×0.51
- C. 25.2×57
- D. 25.6×51

11. In Lucky Food Store, each lunch set costs $\$45.6$. Customers can get one stamp by every spending of $\$25$, and one extra stamp for buying one lunch set. Edward bought 5 lunch sets. How many stamps did he get altogether?

- A. 9
- B. 10
- C. 14
- D. 15

11. 在幸運快餐店，每份午市套餐售 $\$45.6$ 。顧客每消費滿 $\$25$ 可得印花一個，每購買一份午市套餐可額外得到一個印花。德恆買了 5 份午市套餐，他共得印花多少個？

- A. 9
- B. 10
- C. 14
- D. 15

12. The monthly salary of Miss Fok was \$9000 last year. This year she gets an increase of 15% in salary. If she saves 40% of her salary this month, how much does she save?

- A. \$5400
- B. \$4140
- C. \$3600
- D. \$1350

12. 霍小姐去年的月薪是\$9000，她今年獲加薪15%。如果本月她把月薪的40%作為儲蓄，她儲蓄了多少？

- A. \$5400
- B. \$4140
- C. \$3600
- D. \$1350

13. There are 40 waiters in a restaurant. Three waiters are absent today. What percentage of the waiters is present?

- A. 7.5%
- B. 37%
- C. 90%
- D. 92.5%

13. 酒樓共有40名員工，今天有3人缺席，員工的出勤率是多少？

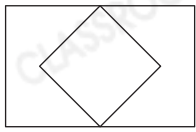
- A. 7.5%
- B. 37%
- C. 90%
- D. 92.5%

14. What kind(s) of figures can be formed by fitting four right-angled isosceles triangles of the same size together?


- I. parallelogram
 - II. trapezium
 - III. rectangle
- A. I and II only
 - B. I and III only
 - C. II and III only
 - D. I, II and III

14. 把四個大小相同的等腰直角三角形拼合，可以拼砌出以下哪個/些圖形？

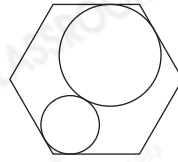
- I. 平行四邊形
 - II. 梯形
 - III. 長方形
- A. 只有I及II
 - B. 只有I及III
 - C. 只有II及III
 - D. I、II及III



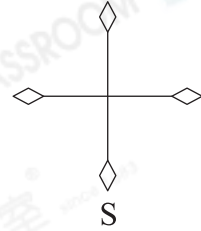
P



Q



R



S

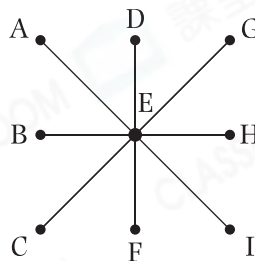
15. Which of the above figures have only two axes of symmetry?

- A. P and Q
- B. P and R
- C. Q and R
- D. R and S

15. 上圖中，哪些圖形只有兩條對稱軸？

- A. P 和 Q
- B. P 和 R
- C. Q 和 R
- D. R 和 S

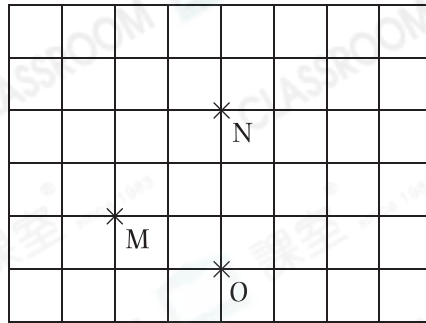
16. If B is northeast of H, what direction is I from A?



- A. east
- B. northeast
- C. west
- D. northwest

16. 如果B在H的東北方，I在A的哪一方？

- A. 東
- B. 東北
- C. 西
- D. 西北

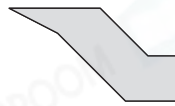


17. In the above figure, Murray went west from M to N. When he arrived at N, in which direction is he from O?

- A. southeast
- B. southwest
- C. northeast
- D. northwest

17. 上圖中，明樂由M向西出發往N，到達N時，他在O的哪一方？

- A. 東南
- B. 西南
- C. 東北
- D. 西北



18. The above diagram shows part of a symmetrical figure. The dotted line is the axis of symmetry of the figure. Which of the following can be the symmetrical figure?

- A.
- C.

18. 上圖是一個軸對稱圖形的一部分，虛線是圖形的對稱軸，下列哪一個會是該軸對稱圖形？

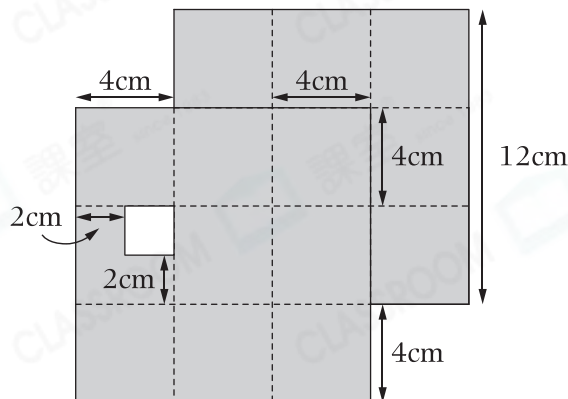
- B.
- D.

19. Windy has a piece of string of length 60cm. She uses part of the string to make a square of side 4cm. She then uses the string left to make a circle. What is the diameter of the circle?
(Take π as $\frac{22}{7}$)

- A. 2cm
- B. 7cm
- C. 14cm
- D. 28cm

19. 詠恩有一條長 60cm 的繩子，她用部分繩子圍了一個邊長 4cm 的正方形，然後用餘下的繩子圍成一個圓。圓的直徑是多少？(取 π 為 $\frac{22}{7}$)

- A. 2cm
- B. 7cm
- C. 14cm
- D. 28cm



20. Two squares of side 12cm are placed together. Parts of them are overlapped and a white portion is cut away as shown in the above figure. What is the area of the shaded part?

- A. 220cm^2
- B. 224cm^2
- C. 268cm^2
- D. 272cm^2

20. 將兩個邊長 12cm 的正方形放在一起，其中部分重疊，並剪去白色部分，如上圖所示。陰影部分的面積是多少？

- A. 220cm^2
- B. 224cm^2
- C. 268cm^2
- D. 272cm^2

Figure 1
圖一

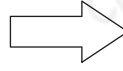
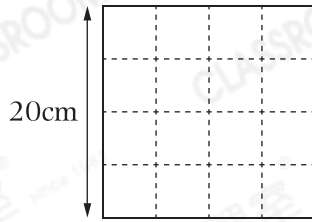
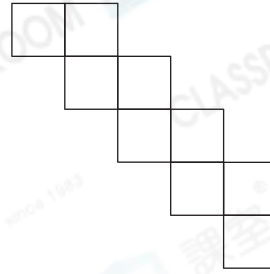


Figure 2
圖二

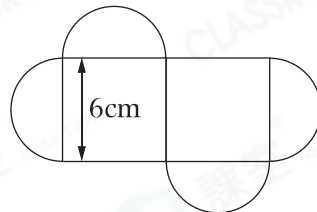


21. Figure 1 is a square of side 20cm. Tom cuts along the dotted lines and divides it into 16 small squares of the same size. Then he puts 9 of the small squares together to form a new figure, as shown in Figure 2. What is the perimeter of Figure 2?

- A. 80cm
- B. 100cm
- C. 320cm
- D. 405cm

21. 圖一是一個邊長為20cm的正方形。成勇沿着虛線把它分割成16個大小相同的小正方形，並把其中9個小正方形拼砌成一個新圖形，如圖二所示。圖二的周界是多少？

- A. 80cm
- B. 100cm
- C. 320cm
- D. 405cm

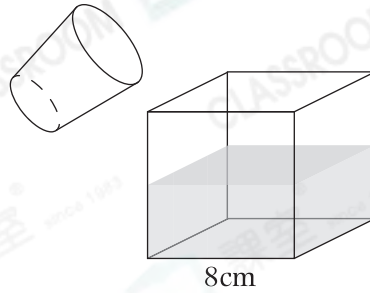


22. The above figure is formed by 2 squares of the same size and 4 semi-circles of the same size. What is the area of the figure? (Take π as 3.14)

- A. 128.52cm^2
- B. 185.04cm^2
- C. 298.08cm^2
- D. 524.16cm^2

22. 上圖由2個大小相同的正方形和4個大小相同的半圓組成，這個圖形的面積是多少？(取 π 為3.14)

- A. 128.52cm^2
- B. 185.04cm^2
- C. 298.08cm^2
- D. 524.16cm^2

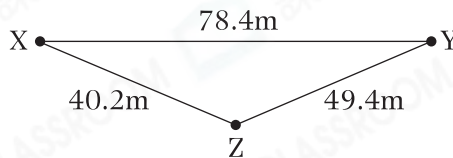


23. Two full glasses of water are poured into a cubic plastic box and fill the plastic box half full, as shown above. What is the capacity of the glass?

- A. 64mL
- B. 128mL
- C. 256mL
- D. 512mL

23. 把兩滿杯水倒進一個正方體膠盒，剛好盛滿了膠盒的一半，如上圖所示。水杯的容量是多少？

- A. 64mL
- B. 128mL
- C. 256mL
- D. 512mL



24. In the above figure, Andy walked to place Y from place X directly with an average speed of 1.4m/s. At the same time, Davy walked to place Y from place X through place Z. If they reached place Y at the same time, what was the average speed of Davy?

- A. 1.4m/s
- B. 1.6m/s
- C. 5.6m/s
- D. 6.4m/s

24. 上圖中，安迪以平均速率 1.4m/s 由 X 地直接步行前往 Y 地。同一時間，大維步行由 X 地出發，經 Z 地前往 Y 地。如果他們同時到達 Y 地，大維的平均速率是多少？

- A. 1.4m/s
- B. 1.6m/s
- C. 5.6m/s
- D. 6.4m/s

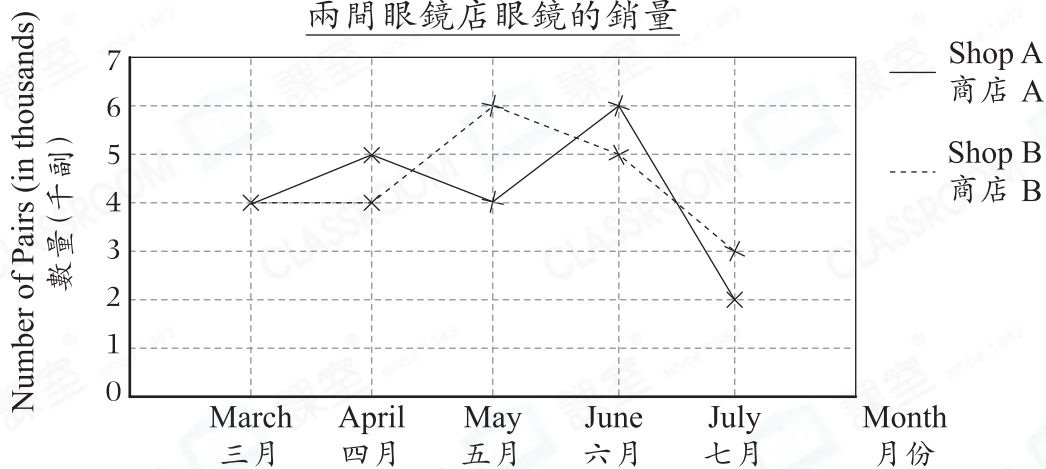
25. Anna and Kelvin left home and walked along a straight road towards east. Anna set off at 9:00a.m. at an average speed of 0.9m/s. Kelvin set off at 9:10a.m. at an average speed of 1.2m/s. What was the distance between Anna and Kelvin at 9:16a.m.?

- A. 7.2m
- B. 33.6m
- C. 132m
- D. 432m

25. 佳茜和凱文離開家沿直路向東方步行。佳茜在9:00a.m.出發，她步行的平均速率是0.9m/s，凱文在9:10a.m.出發，他步行的平均速率是1.2m/s。在9:16a.m.，兩人相距多少？

- A. 7.2m
- B. 33.6m
- C. 132m
- D. 432m

Sales of Glasses in Two Shops
兩間眼鏡店眼鏡的銷量



26. According to the above graph, which month has the smallest difference in sales between the two shops?

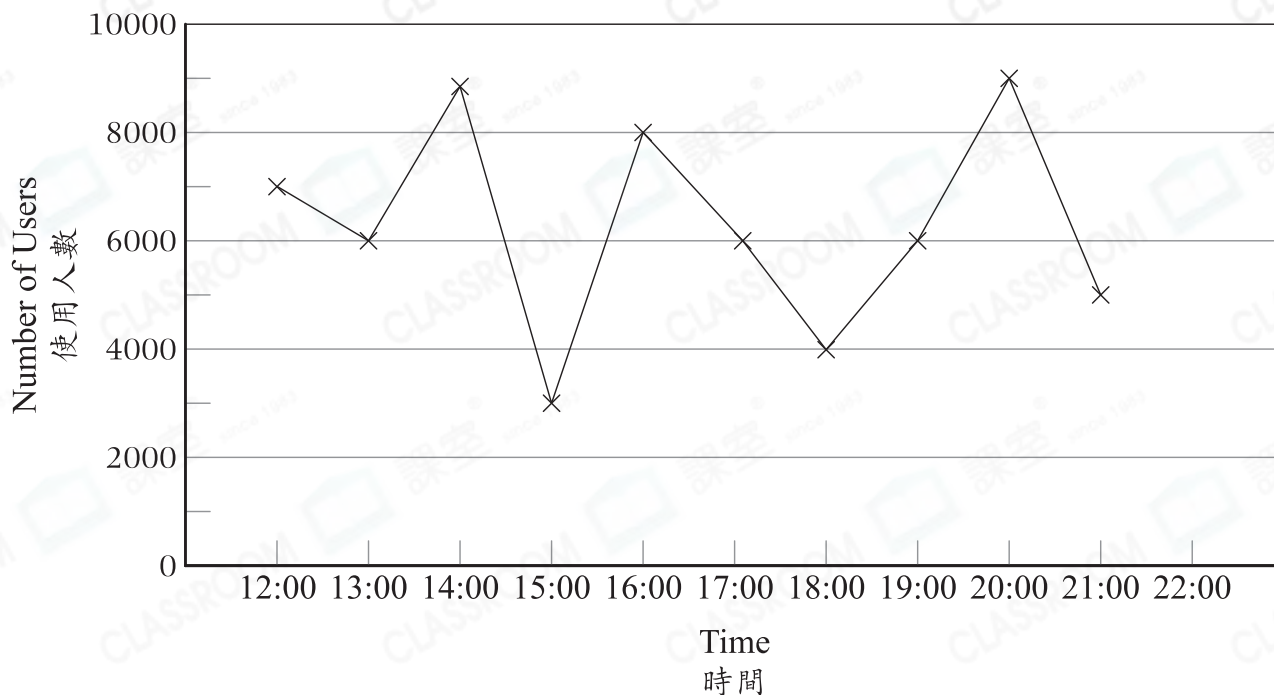
- A. March
- B. April
- C. May
- D. June

26. 根據上圖，哪一個月兩間眼鏡店的銷量相差最小？

- A. 三月
- B. 四月
- C. 五月
- D. 六月

Number of Active Users of an Application in the Last 10 Hours

某應用程式過去10小時的活躍用戶人數



27. The clerk wanted to use the above graph to show the number of active users of an application in the last 10 hours. However, he forgot to indicate the number of active users at 22:00 in the graph. If the average number of active users of the bottom two periods was 2500, how many active users were there at 22:00?

- A. 1000
- B. 1250
- C. 2000
- D. 3500

27. 職員嘗試用上圖來表示過去10小時某應用程式的活躍用戶人數，但他忘記標示22:00的活躍用戶人數。如果最少活躍用戶的兩個時間平均活躍用戶人數是2500人，則在22:00的活躍用戶人數是多少人？

- A. 1000
- B. 1250
- C. 2000
- D. 3500

28. Tom wants to show the distribution of inventory of different canned fruit. Which of the following is the most suitable graph that he should use?

- A. Broken line graph
- B. Compound bar chart
- C. Pie chart
- D. Pictogram

28. 遠明想用統計圖來表示各種水果罐頭的存量分布。他選用下列哪一種統計圖最適當？

- A. 折線圖
- B. 複合棒形圖
- C. 圓形圖
- D. 象形圖

29. There were originally 5 members in the tennis team. Their average weight was 36.7kg. After Victor joins the team, their average weight is 37.1kg. How heavy is Victor?

- A. 36.4kg
- B. 38.1kg
- C. 39.1kg
- D. 40.6kg

29. 網球隊原有5名成員，他們的平均體重是36.7kg。維達加入球隊後，成員的平均體重是37.1kg。維達的體重是多少？

- A. 36.4kg
- B. 38.1kg
- C. 39.1kg
- D. 40.6kg

30. If $3 + E \times 40\% = 9$, then $E = ?$

- A. 30
- B. 15
- C. 3.6
- D. 2.4

30. 如果 $3 + E \times 40\% = 9$ ，那麼 $E = ?$

- A. 30
- B. 15
- C. 3.6
- D. 2.4

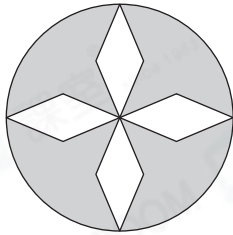
SECTION B (40 marks)

Working steps must be shown in answering questions in this section unless specified otherwise.

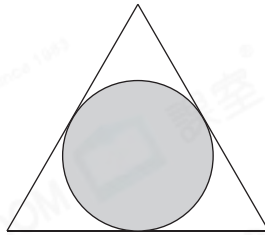
乙部 (40分)

除特別指明外，在回答本部問題時，須列出計算步驟。

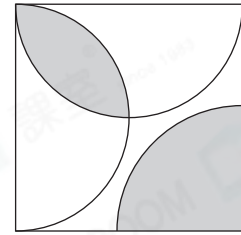
31. The school held a badge design competition. The following are the designs of some girls.



Sony
頌恩



Lucy
美倩



Kaley
凱琳

(a) How many axes of symmetry were there for each of their designs? (Give the answer only)
[2 marks]

(b) The student who designed badge with the most number of axes of symmetry would win a prize. On the answer sheet,

- (i) put a '✓' in the space under the prize winner's name;
- (ii) draw all the axes of symmetry on her design.

[4 marks]

31. 學校舉行襟章設計比賽，以下是部分女生的作品。

(a) 她們的作品各有多少條對稱軸？(只須寫出答案) [2分]

(b) 所設計襟章有最多對稱軸的學生可獲得獎勵。於答題紙上，

- (i) 在獲得獎勵的學生名字下的空格內加上「✓」；
- (ii) 在她的作品上畫出所有對稱軸。

[4分]

Figure 1
圖一

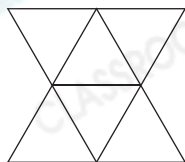
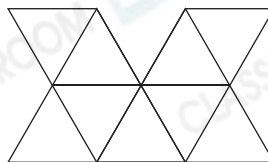


Figure 2
圖二



32. Jim used 15 equilateral triangles of the same size to form the shapes in Figure 1 and Figure 2, and 5 equilateral triangles were left.

(a) What percentage of all equilateral triangles were left?

[4 marks]

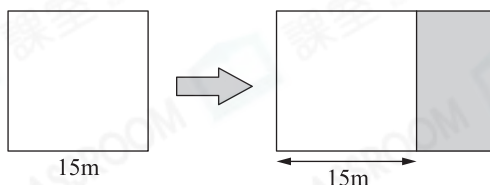
(b) The perimeter of Figure 1 is 30cm shorter than that of Figure 2. What is perimeter of Figure 2? (Give the answer only) [2 marks]

32. 志榮用了15個大小相同的等邊三角形拼出了圖一和圖二的形狀後，還餘下5個。

(a) 餘下的等邊三角形佔全部的百分之幾？ [4分]

(b) 圖一的周界比圖二短30cm。圖二的周界是多少？(只須寫出答案) [2分]

33. Mr Wong had a square garden of side 15m. When one end of the garden was extended to $\frac{2}{5}$ of the side of the original side as shown below.



(a) What was the length of the longer side of the garden after extension? (Give the answer only) [2 marks]

(b) As compared to the original garden, what was the increase in its area after extension? [4 marks]

33. 黃先生有一個邊長為15m的正方形花園，當花園一端擴展原有邊長的 $\frac{2}{5}$ 長度如下圖所示。

(a) 花園擴展後，較長一邊的長度是多少？(只須寫出答案) [2分]

(b) 擴展後，花園的面積比原來的增加了多少？ [4分]

Charge for renting bicycle 租借單車收費	
First 2 hours 首2小時	\$45
Every 0.5 hour thereafter 以後每0.5小時 (0.5 hour rate is charged for time less than 0.5 hour) (不足0.5小時亦以0.5小時計算收費)	\$ x

34. Janie rented a bicycle for 3.2 hours.

- (a) According the above table, how much should Janie pay? (Give the answer only and express the answer in terms of x) [2 marks]
- (b) If Janie paid \$100.5, what was the charge for every 0.5 hour after the first 2 hours? (Use equation to solve the problem and show your working) [4 marks]

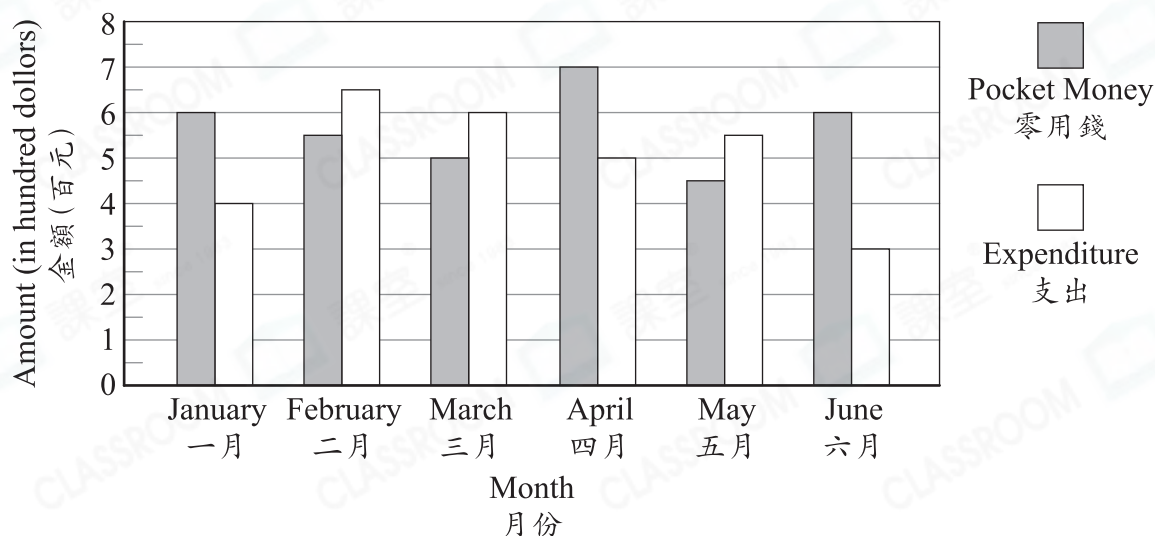
34. 珍妮租借一輛單車3.2小時。

- (a) 根據上表，珍妮須付款多少？
(只須寫出答案，答案以 x 表示) [2分]
- (b) 如果珍妮須付款\$100.5，那麼首2小時後每0.5小時的收費是多少？(須用方程列式計算) [4分]

35. The following graph shows the pocket money and expenditure of Jeffrey in the first half year. When his pocket money is more than his expenditure in a certain month, he saves the remaining up. When his pocket money is less than his expenditure in a certain month, he uses his saving to cover the expenditure.

35. 下圖顯示傑明上半年的零用錢和支出。當某月的零用錢多於支出時，他把餘下的零用錢儲蓄起來。當某月的零用錢少於支出時，他會使用儲蓄來應付支出。

The Pocket Money and Expenditure of Jeffrey in the First Half Year
傑明上半年的零用錢和支出



(a) What was the average monthly expenditure of Jeffrey in the first half year? [4 marks]

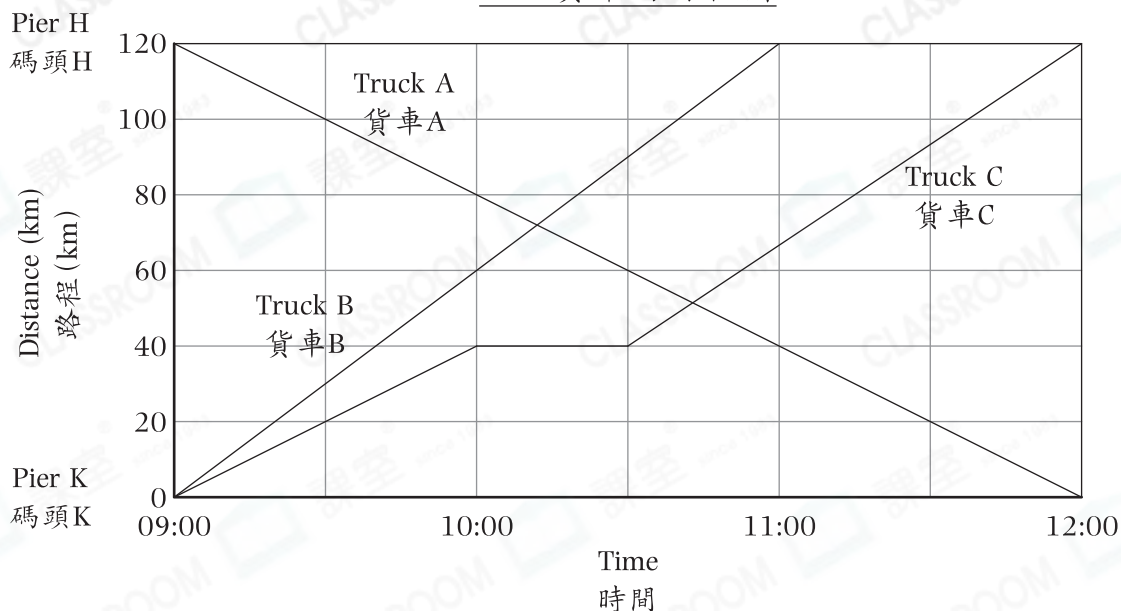
(a) 傑明上半年平均每月的支出是多少？ [4分]

(b) From January to March, do you think Jeffrey had enough money to cover his expenditure? Explain. [4 marks]

(b) 由一月至三月，傑明是否有足夠的零用錢以應付支出？試解釋。 [4分]

Travel Graph of Three Trucks

三輛貨車的行程圖



36. The above figure is the travel graph of three trucks travelling between Pier H and Pier K.

(a) What was the average speed of Truck A in kilometres per hour?
[4 marks]

(b) Which truck stopped on its way? How long did it stop? (Give the answer only) [2 marks]

(c) Which truck had the highest average speed? What was its average speed in kilometres per hour? (Give the answer only) [2 marks]

36. 上圖是三輛貨車往來碼頭H和碼頭K的行程圖。

(a) 貨車A的平均速率是每小時多少公里？ [4分]

(b) 哪一輛貨車在中途停留？它停留了多久？（只須寫出答案） [2分]

(c) 哪一輛貨車的平均速率最快？它的平均速率是每小時多少公里？（只須寫出答案） [2分]

End of Test Paper

測驗卷完

HONG KONG ATTAINMENT TEST

香港學科測驗

Pre-Secondary One Mathematics Mock Paper 4

中一入學前數學科模擬試卷(四)

Answer Sheet

答題紙

Name of Student

學生姓名：_____ (中文)

Class

班別：_____ ()

Section A (60 marks) You only need to write down the letter preceding the selected answer.
(2 marks each)

甲部 (60分)

學生只須填上所選答案前的英文字母。(每題2分)

1.	11.	21.
2.	12.	22.
3.	13.	23.
4.	14.	24.
5.	15.	25.
6.	16.	26.
7.	17.	27.
8.	18.	28.
9.	19.	29.
10.	20.	30.

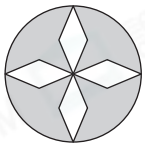
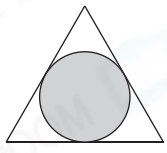
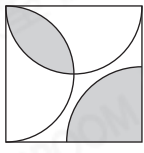






For Teacher's Use

供教師用

		Number 數	Shape & Space 圖形與空間	Measures 度量	Data Handling 數據處理	Algebra 代數
Section A 甲部	Item 題目	1-13	14-18	19-25	26-29	30
	Marks 分數					
Section B 乙部	31(a)					
	31(b)					
	32(a)					
	32(b)					
	33(a)					
	33(b)					
	34(a)					
	34(b)					
	35(a)					
	35(b)					
	36(a)					
	36(b)					
36(c)						
(Sections A + B) Total (甲部及乙部) 合計						
Grand Total 總計						

Section B (40 marks) Working steps must be shown in answering questions in this section unless specified otherwise.

乙部 (40分) 除特別指明外，在回答本部問題時，須列出計算步驟。

		Marks 佔分	Marks 得分												
31(a).	<table border="1"> <thead> <tr> <th>Student 學生</th> <th>Sony 頌恩</th> <th>Lucy 美倩</th> <th>Kaley 凱琳</th> </tr> </thead> <tbody> <tr> <td>Number of axes of symmetry 對稱軸數量</td> <td></td> <td></td> <td></td> </tr> </tbody> </table>	Student 學生	Sony 頌恩	Lucy 美倩	Kaley 凱琳	Number of axes of symmetry 對稱軸數量				2	<input type="text"/>				
Student 學生	Sony 頌恩	Lucy 美倩	Kaley 凱琳												
Number of axes of symmetry 對稱軸數量															
31(b).	<table border="1"> <thead> <tr> <th></th> <th>Sony 頌恩</th> <th>Lucy 美倩</th> <th>Kaley 凱琳</th> </tr> </thead> <tbody> <tr> <td>(i)</td> <td></td> <td></td> <td></td> </tr> <tr> <td>(ii)</td> <td></td> <td></td> <td></td> </tr> </tbody> </table>		Sony 頌恩	Lucy 美倩	Kaley 凱琳	(i)				(ii)				4	<input type="text"/>
	Sony 頌恩	Lucy 美倩	Kaley 凱琳												
(i)															
(ii)															
32(a).		4	<input type="text"/>												
32(b).	The perimeter of Figure 2 was _____ cm. 圖二的周界是_____ cm。	2	<input type="text"/>												

Go On To Next Page

轉下頁續答

		Marks 估分	Marks 得分
33(a).	The length of the longer side was _____ m. 較長一邊的長度是_____ m。	2	<input type="text"/>
33(b).		4	<input type="text"/>
34(a).	Janie should pay \$ _____ . 珍妮須付款 \$ _____ 。	2	<input type="text"/>
34(b).		4	<input type="text"/>
35(a).		4	<input type="text"/>

Go On To Next Page

轉下頁續答

Marks
估分

Marks
得分

35(b).

Because
因為

* Enough / Not enough (* Circle the correct answer)

* 足夠 / 不足夠 (* 圈出正確的答案)

4

36(a).

4

36(b).

Truck _____ stopped for _____ minutes.

貨車 _____ 停留了 _____ 分鐘。

2

36(c).

Truck _____ had the highest average speed. Its average speed was _____ km/h.

貨車 _____ 的平均速率最快，平均速率是 _____ km/h。

2

END
完