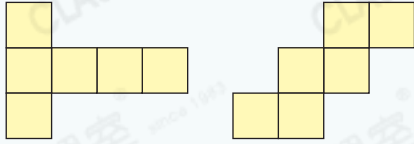




要點導航

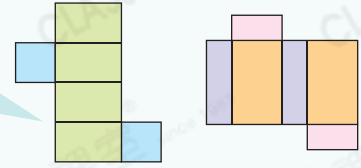
例 正方體摺紙圖樣



由6個正方形組成

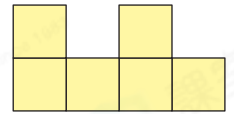
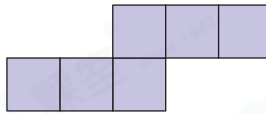
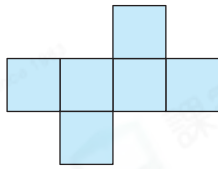
長方體摺紙圖樣

- ① 由4個長方形和2個正方形組成。
- ② 由6個長方形組成。

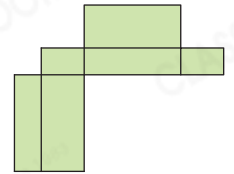
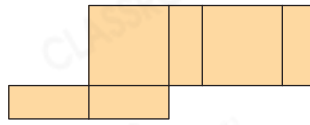



圈出可摺出指定立體圖形的所有摺紙圖樣。

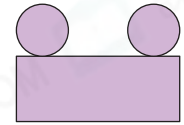
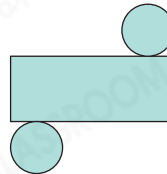
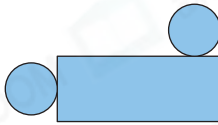
1. 正方體



2. 長方體

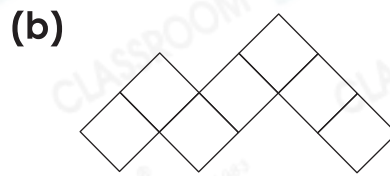
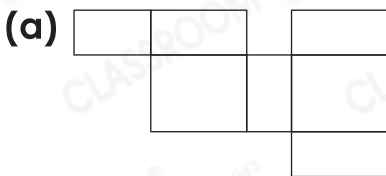


3. 圓柱

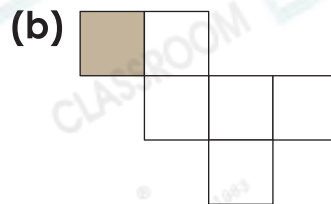
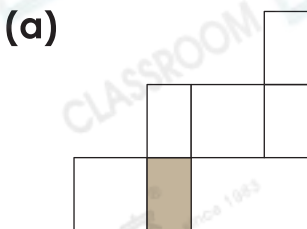


安寧在玩數學塗色遊戲。

4. 在下列各圖中找出正方體或長方體的摺紙圖樣，然後把它塗上顏色。

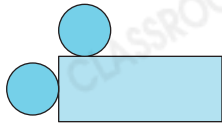
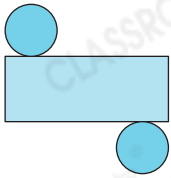


5. 把下列各摺紙圖樣中與着色面相對的面塗上顏色。


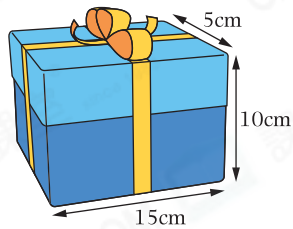


這個月若雨有很多朋友過生日，她做了很多禮物盒。

6. 圈出能摺成右圖禮物盒的摺紙圖樣。

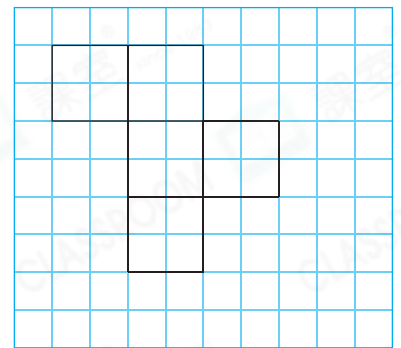
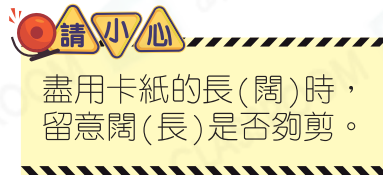



7. 畫出下圖禮物盒的摺紙圖樣。



8. (a) 在右圖中完成正方體禮物盒的摺紙圖樣。

(b)



從上圖剪出 (a) 部的摺紙圖樣，摺出的正方體禮物盒的邊長最長可以有 \_\_\_\_\_ cm。



### 能力挑戰館

9. 哪一個是由左面摺紙圖樣摺出來的正方體？圈出答案。

