

# 8

## 立體圖形(一)



日期：\_\_\_\_\_

成績：\_\_\_\_\_

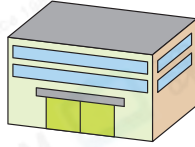


把物件和相似的立體圖形連起來。

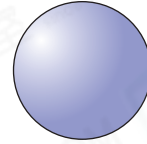
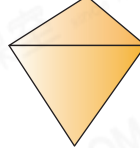
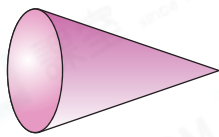
1.



2.

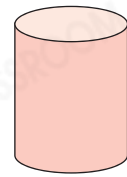
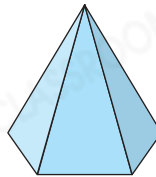
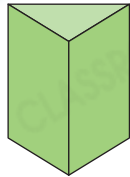
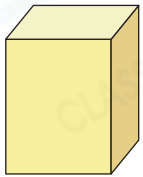


3.

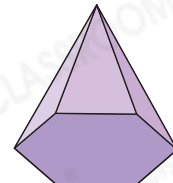

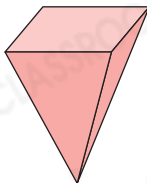
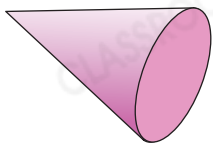


圈出所有答案。

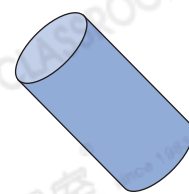
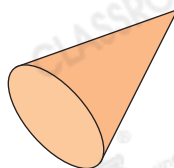
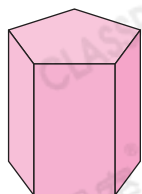

4. 所有角柱



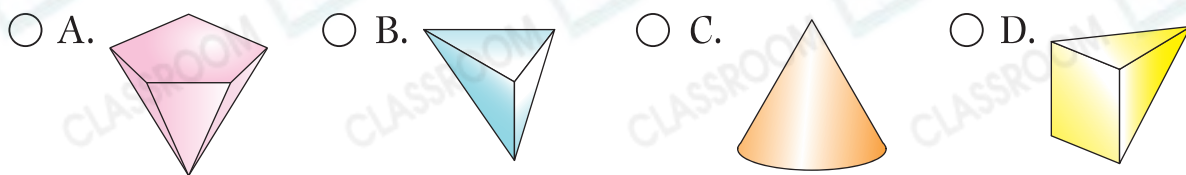
5. 所有角錐



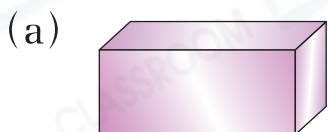
6. 所有圓錐



7. 以下哪一個立體圖形不是角錐？

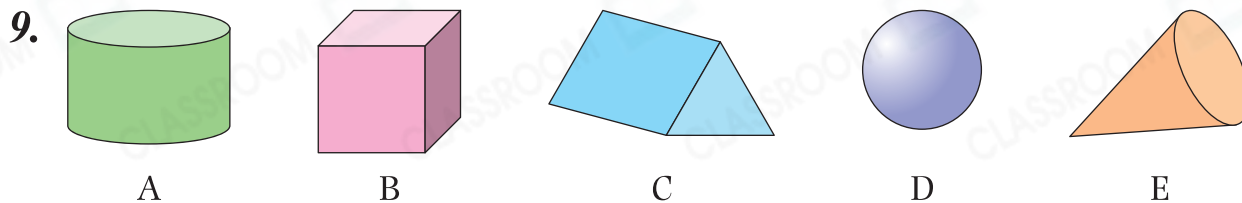


8. 寫出以下各立體圖形的名稱。



\_\_\_\_\_

\_\_\_\_\_



列出：

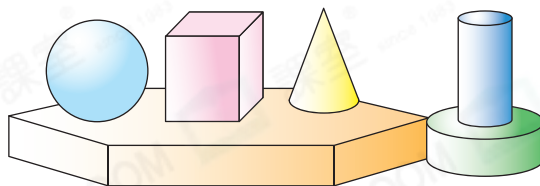
(a) 角柱：\_\_\_\_\_

(b) 球：\_\_\_\_\_

得分重點

⊗ 留意可能有多個答案。

10.



上圖中，

(a) 共有\_\_\_\_\_個圓錐。

(b) \_\_\_\_\_和圓柱的數量相同。

11. 把右面的兩罐嬰兒奶粉整齊地疊起來，會形成哪種立體圖形？

答案：\_\_\_\_\_

