



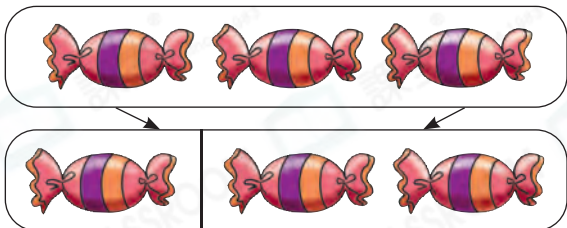
日期：\_\_\_\_\_

成績：\_\_\_\_\_



## 填填看。

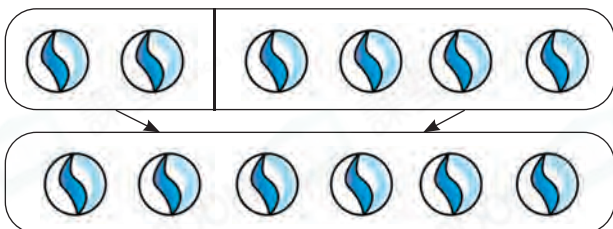
1.



3可分解為1和\_\_\_\_\_。

$$3 = 1 + \underline{\hspace{2cm}}$$


2.



2和4合成為\_\_\_\_\_。

$$2 + 4 = \underline{\hspace{2cm}}$$

3.



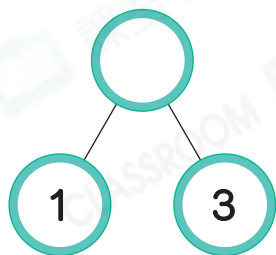
$$8 - 3 = \underline{\hspace{2cm}}$$

$$8 = \underline{\hspace{2cm}} + \underline{\hspace{2cm}}$$



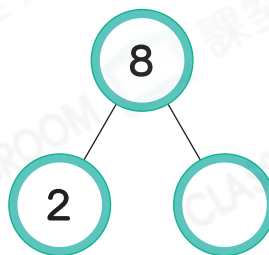
## 填一填。

4.



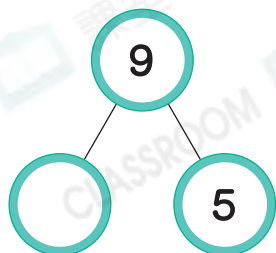
$$1 + 3 = \boxed{\hspace{2cm}}$$

5.



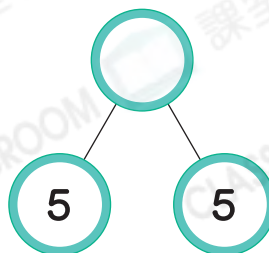
$$8 - 2 = \boxed{\hspace{2cm}}$$

6.






$$9 = \boxed{\hspace{2cm}} + 5$$


7.

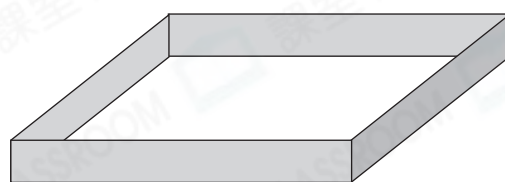
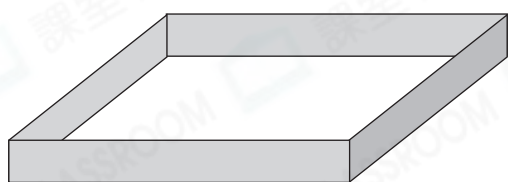


$$5 + 5 = \boxed{\hspace{2cm}}$$

8. 下列哪一幅圖表示「 $7 = 2 + 5$ 」?



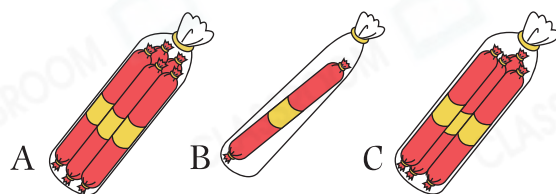
9. 把10個  分成兩份，在盒內畫「○」表示。





$$10 = \square + \square$$


10. 右圖中，哪兩種包裝的香腸數目剛好合成為6條?

答案：包裝\_\_\_\_\_和\_\_\_\_\_



11. (a) 媽媽購買了\_\_\_\_\_個水果。

(b) 媽媽  能 / 不能 (  圈出答案) 把這些水果分成兩等份。



腦力挑戰站



詳盡提示

P可分解為兩個相同的奇數，且這兩個奇數都比6小，P可能是\_\_\_\_\_。

