



Date: \_\_\_\_\_

Mark: \_\_\_\_\_



Circle the answers according to the instructions.

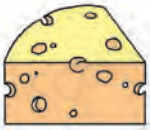
1. The taller one



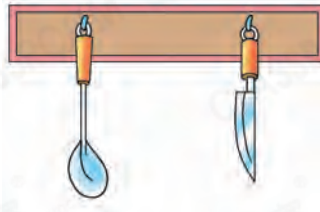
2. The shorter one



3. The thinner one



4. The longer one



Circle the answers and draw according to the instruction.



5. The distance between  and (  /  ) is the longest.

6. The distance between  and (  /  ) is the shortest.

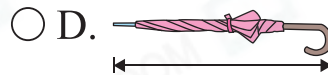
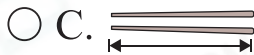
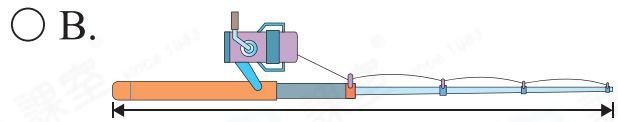
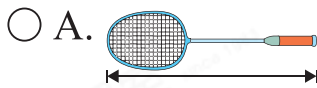
7. Draw a taller tree between  and .

8. Arrange three ropes from the shortest to the longest. Write down the letters for the answer.



Answer: Rope \_\_\_\_\_, rope \_\_\_\_\_, rope \_\_\_\_\_  
(Shortest) (Longest)

9. Which of the following is most suitable for measuring the height of a TV?

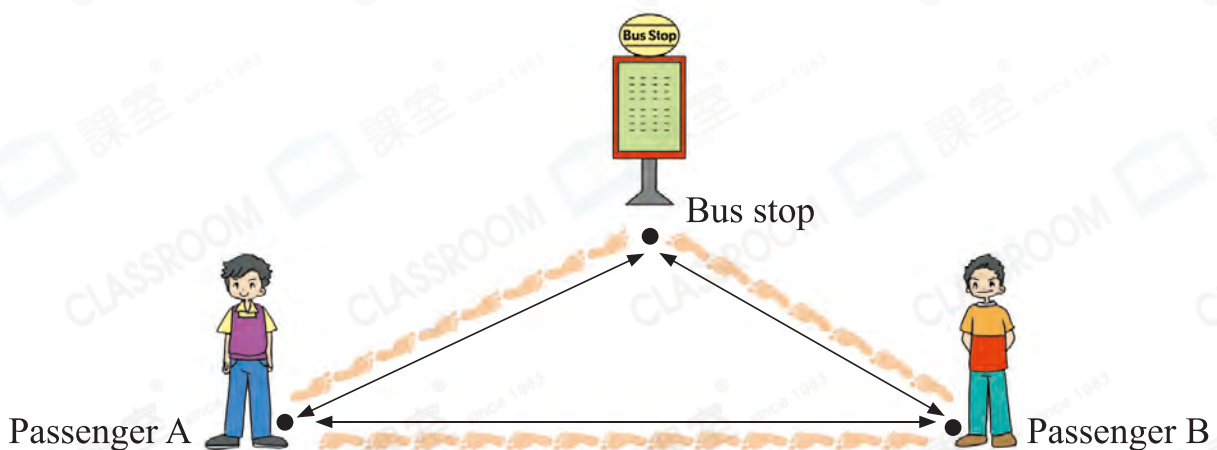


10. In the picture on the right, which book is the thinnest?


Answer: ☆ Comic / Dictionary / Fiction  
(☆ Circle the answer)



11.



(a) The distance between passenger A and passenger B is \_\_\_\_\_



(b) Passenger ☆ A / B (☆ circle the answer) is farther from the bus stop.