

Test I

Date: _____




Mark: _____ /27

Time limit: 30 minutes

Exercise 1 – 8

Strand	Assessment Focus	Question	Mark
Number	<ul style="list-style-type: none"> ◆ Numbers up to 20 ◆ Counting onwards and backwards ◆ Odd and even numbers ◆ Order and quantity of objects ◆ Composition of numbers 2 to 18 	1 – 12, 15(b), 19(c)	/15
Measures	<ul style="list-style-type: none"> ◆ Length and distance 	13 – 14, 15(a), 16, 17(a)	/7
Shape and Space	<ul style="list-style-type: none"> ◆ Positions 	17(b), 18, 19(a) – (b)	/5



Self-grading

21 – 27 marks 
 14 – 20 marks 
 0 – 13 marks 

Marking record




(a) There are _____ candies above. This number is an
 ☆ odd / even (☆ circle the answer) number.

(b) There are _____ ☆ more / fewer (☆ circle the answer)  than .

2. There is/are _____ even number(s) from 9 to 13.

3. Which of the following diagrams shows '9 = 4 + 5'?



4. Count backwards from 15 to 8.

--	--	--	--	--	--	--	--







1 Mark

1 Mark

1 Mark

1 Mark

1 Mark

5. A clown has 6  and 8 . There are  more / fewer  than . ( Circle the answer)

1 Mark

6. Which group of numbers can be obtained by splitting 15?

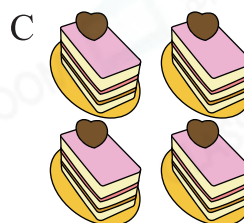
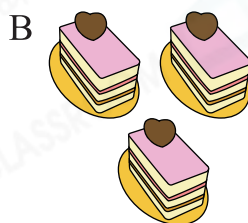

1 Mark

- A. 5 and 8
 C. 8 and 7

- B. 7 and 9
 D. 9 and 5

7. Each box can hold 6 pieces of cake at most. Which two groups of cakes can be put together into the same box?

1 Mark



Answer: _____ and _____

8. Arrange the numbers from the smallest to the greatest.

1 Mark

17

5


9

13

Answer: _____, _____, _____, _____
 (Smallest) (Greatest)

9. Blacken 5  with pencil.

1 Mark



10. Count backwards from 17 to 7. How many **odd numbers** are there?

1 Mark

Answer: _____



1 Mark



1 Mark



1 Mark



1 Mark



1 Mark



1 Mark



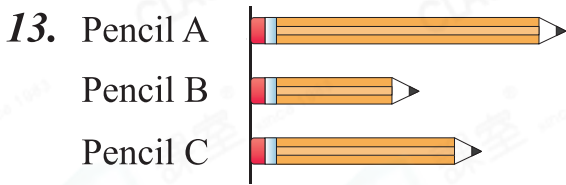
1 Mark



The numbers above are counting onwards. ☾ and ☆ is

_____.

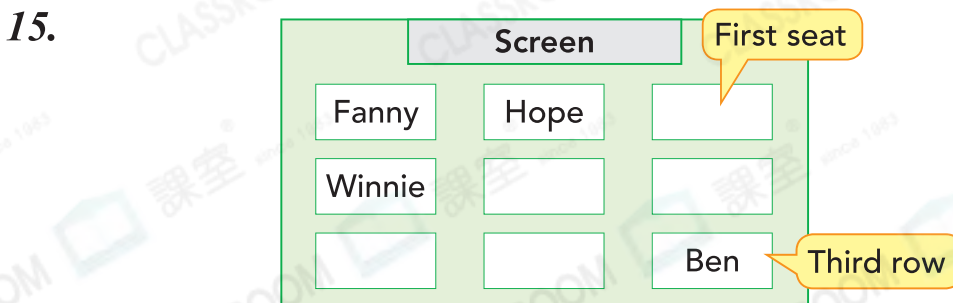
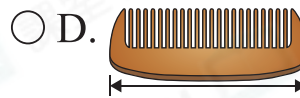
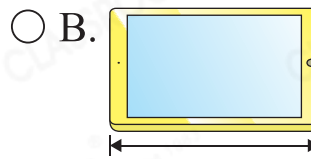
12. Give to two sisters. One of them got a pair. The other one got _____



Pencil ☆ A / B / C is the longest.

(☆ Circle the answer)


14. Which of the following is most suitable for measuring the length of ?










(a) ☆ Hope / Fanny / Ben / Winnie is farthest from the screen. (☆ Circle the answer)

(b) Winnie sits at the _____ seat in the _____ row.

16. Sophie is measuring the lengths of stationeries.



- (a) The length of  is about _____ .
- (b) The length of  is about _____ .
- (c)  is about _____  longer than .



1 Mark



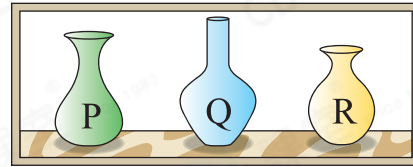
1 Mark



1 Mark

17. In the picture on the right,

- (a) vase _____ is the tallest.
- (b) Vase _____ is at the rightmost.







1 Mark



1 Mark

18. Cecilia hangs a string of paper cranes from a rope.

- (a)  is _____ .
- (b) There is/are _____ paper crane(s) under .














1 Mark



1 Mark

19.



- (a)   /  is the last one.
( Circle the answer)
- (b)   /  is between  and .
- ( Circle the answer)
- (c) After the first customer left,  is the _____ one.



1 Mark



1 Mark



1 Mark



Check your work

- All questions finished
 Answers checked