




Date: _____

Mark: _____



Study the pictures and fill in the boxes.


1.



$$5 + \square = \square$$

5 plus \square equals \square .

2.



$$\square + \square = \square$$

\square plus \square

equals \square .



Match the both sides that have the same value.

3.




•

•

9 + 3

4.

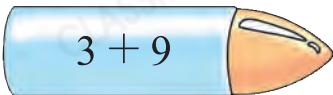


•

•

3 + 2

5.




•

•

4 + 4

6.




•

•

8 + 7

7.



•

•

7 + 4


8.



(a) There are _____  and _____ .

(b) The total number of  and  is:
 _____ + _____ = _____

9.



How many  are there in the above picture? (Show your working)

_____ 
 = _____

There are _____  in the above picture.

10.




Figure 1

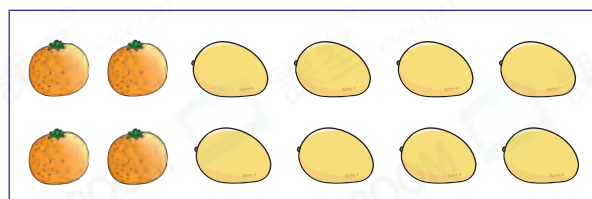


Figure 2

(a) Is the number of fruit in Figure 1 the same as that in Figure 2?

Answer: Yes / No (Circle the answer)

(b) There are _____  and  altogether.

11. If $\triangle + \triangle = 18$, then $\triangle + 2 = ?$

Advanced

- A. 8 B. 9 C. 11 D. 12