



Date: _____

Mark: _____



Count and fill in the blanks.

1.





2.





3.



STEAM
EDUCATION pedia

0 is not meaningless. For example, when the temperature is at or below 0°C , water will freeze.

Colour the with the correct answers.

4.

$$5 + 0 =$$

0

5

1

5.

$$7 - 7 =$$

1

7

0

6.

$$8 - 0 =$$

0

8

4

7.

$$0 + 1 =$$

1

0

10

8. $4 - \underline{\hspace{2cm}} = 4$

9. $\underline{\hspace{2cm}} + 1 = 1$

10. $5 - \underline{\hspace{2cm}} = 0$

11. $\underline{\hspace{2cm}} - 0 = 8$



12.

(a) The total number of  and  is:

$$\underline{\hspace{2cm}} + \underline{\hspace{2cm}} = \underline{\hspace{2cm}}$$

(b)  is more than  by: $\underline{\hspace{2cm}} - \underline{\hspace{2cm}} = \underline{\hspace{2cm}}$ 13. Which of the following is **not correct**?


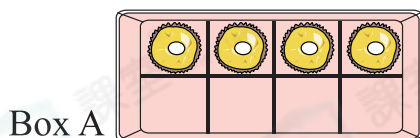


○ A. $1 - 0 = 0$ ○ B. $3 + 0 = 3$ ○ C. $0 + 2 = 2$ ○ D. $9 - 9 = 0$

14. Billy took all  from the pen holder on the right. How many  are left? (Show your working)

$$\begin{array}{l} \underline{\hspace{2cm}} \quad \bigcirc \quad \underline{\hspace{2cm}} \\ = \underline{\hspace{2cm}} \\ \underline{\hspace{2cm}} \quad \text{pencil} \quad \text{are left.} \end{array}$$



15.

(a) Box  A / B ( circle the answer) will be empty after 4 pieces of chocolate are eaten.(b) Box B will be filled up when $\underline{\hspace{2cm}}$ more piece(s) of chocolate is/are put in.