




Date: _____

Mark: _____



Look at the pictures and fill in the boxes.


1.



$$6 + \square = 11$$

$$11 - \square = 6$$

2.



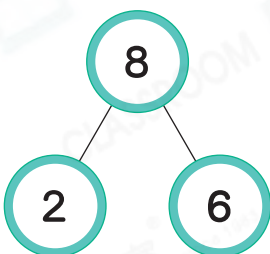
$$\square + 7 = 16$$

$$16 - \square = 9$$



Fill in the boxes with suitable numbers.

3.

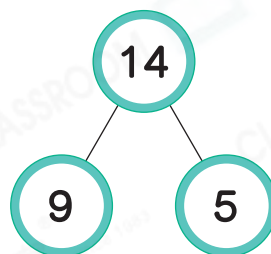


$$2 + 6 = 8$$

$$8 - \square = 6$$

$$\square - 6 = 2$$

4.



$$9 + \square = 14$$

$$14 - \square = 5$$

$$\square - 5 = 9$$



Exchange the two numbers in each of the following expressions.

If the results are the same, put a '✓' in ○. If the results are different, put a 'X' in ○.

5.

$$2 + 6$$



6.

$$4 + 8$$



7.


$$5 - 5$$



8.

$$15 - 7$$



9. Jane divided  into 2 parts and put them on plates. She put 7 pieces on plate A and 8 pieces on plate B. If she put 8 pieces on plate A, _____ pieces will be put on plate B.

10.



I bought 5 duck eggs and 8 chicken eggs.

Mrs. Lam

(a) The number of eggs Mrs. Lam bought is:

$$\underline{\hspace{2cm}} + \underline{\hspace{2cm}} = \underline{\hspace{2cm}}$$

(b) If Mrs. Lam cooks 5 eggs, the number of eggs left will be:

$$\underline{\hspace{2cm}} - \underline{\hspace{2cm}} = \underline{\hspace{2cm}}$$

(c) If Mrs. Lam cooks 8 eggs, the number of eggs left will be:

$$\underline{\hspace{2cm}} - \underline{\hspace{2cm}} = \underline{\hspace{2cm}}$$

11. There are 4 women and 7 men on a minibus.

(a) There are _____ people on the minibus.

(b) After all women get off, how many people are there on the minibus?

$$\underline{\hspace{2cm}} \bigcirc \underline{\hspace{2cm}}$$

$$= \underline{\hspace{2cm}}$$

There are _____ people on the minibus.

Brain Quest



Detailed tips

If $6 + \text{⌘} = 9$, $\text{⌘} + \text{⊗} = 12$, what are the values of ⌘ and ⊗ respectively?

A. $\text{⌘} = 9$, $\text{⊗} = 3$

B. $\text{⌘} = 5$, $\text{⊗} = 7$

C. $\text{⌘} = 4$, $\text{⊗} = 8$

D. $\text{⌘} = 3$, $\text{⊗} = 9$