



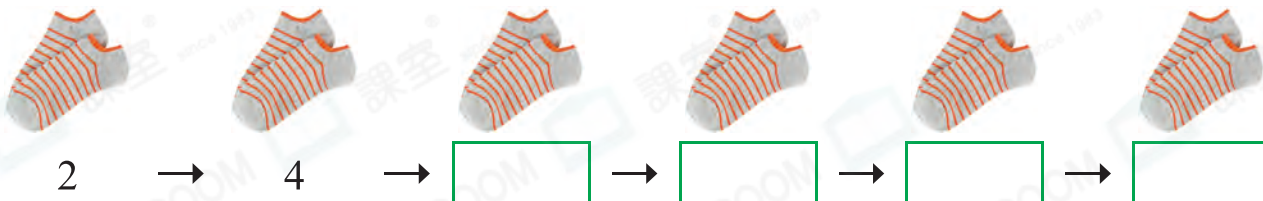
Date: _____

Mark: _____



Count and fill in the boxes.

1.

There are a total of socks in the above picture.

2.


There are a total of bowls in the above picture.

3.

There are a total of eggs in the above picture.

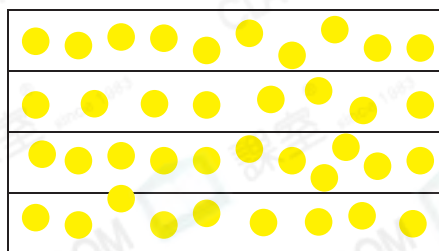
Estimate and count the number of the objects below.

4.



There are _____ ▲ in each
box and about _____ ▲
altogether.

5.



There are _____ ● in each
box and about _____ ●
altogether.

6. Write the numbers according to the patterns.

(a)

20	22					
----	----	--	--	--	--	--

(b)

30	40					
----	----	--	--	--	--	--

7.



10 kids have _____ fingers altogether.

8. 1 more than 9 fives is _____.

9. There are 2 chopsticks in a pair. There are 6 pairs of chopsticks at home. There are a total of _____ chopsticks.

10. Mr. Ng reads 10 pages of a magazine every day. After 4 days, he still has 8 pages to read. There are _____ pages in this magazine.

11. Mr. Lee bought 40 shuttlecocks. He bought _____ pack(s) of shuttlecocks.



Brain Quest



Detailed tips



Simon and his 9 friends share the above fish balls equally. How many fish balls can each of them get?

Answer: _____