

Word Problems Training I





Date: _____

Mark: _____

○ Addition within 10

○ Subtraction within 10



In the above picture, how many pieces of fruit are there?

_____ ○ _____
 = _____
 There are _____ pieces of fruit.

Hints

The number of pieces of fruit means the total number of and .



Yvonne has the above hair clips. After giving 2 pairs of them to her friend, how many hair clip(s) does she have left?

_____ ○ _____
 = _____
 She has _____ hair clip(s) left.

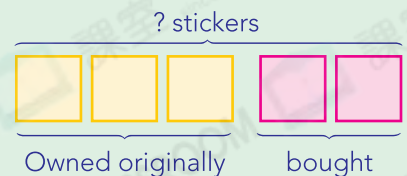
Hints

'A pair' means 2.

3. (a) Wilson had 3 stickers. Then he buys 2 more. How many stickers does he have now?


_____ ○ _____
 = _____
 He has _____ stickers now.

Illustration



(b) William has 8 stickers. After giving 2 of them to Wilson, he has _____ stickers left.

4. The picture below shows the stamps that Mrs. Chan and Mrs. Wong have.




(a) What is the difference in the number of stamps between Mrs. Chan and Mrs. Wong?


_____ ○ _____
 = _____
 The difference is _____.


Hint
 From the picture, Mrs. Chan has more stamps.

(b) Mrs. Chan and Mrs. Wong have _____ stamp(s) altogether.

5. Yuki has 5 . Fiona has 1 more  than her. How many  does Fiona has?

_____ ○ _____
 = _____
 Fiona has _____ .



6.  It can carry 4 passengers at most.



After a taxi is full, how many people are left in the queue?

_____ ○ _____
 = _____
 _____ people are left in the queue.

Hint
 The number of people left
 Original — carried
 ↓
 Maximum seating capacity