

Word Problems Training II



Date: _____

Mark: _____

○ Addition within 18

○ Subtraction within 18

○ Application of 0

1.



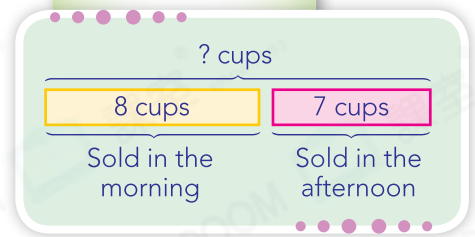
Shopkeeper

8 cups of milk tea are sold this morning.

7 cups of milk tea are sold in the afternoon. How many cups of milk tea are sold today?

_____ ○ _____
 = _____
 _____ cups of milk tea are sold.

Illustration



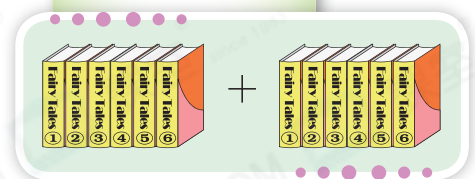
2.



How many books are there in two sets of *Fairy Tales*?

_____ ○ _____
 = _____
 There are _____ books in two sets.

Illustration




3. Jane has 13 wish cards. After giving half a dozen to her sister, how many wish cards does she have left?

_____ ○ _____
 = _____
 She has _____ wish cards left.

Hints

Think about how many 'half dozen' is.

4. David has the pencils below.



If he **does not use** any pencil, how many pencils are left?

_____ ○ _____
 = _____
 _____ pencils are left.

! Hints
 • 'does not use' means '0'.

5. There are 7  and 4  in the fridge.



(a) There are _____  and  altogether.

(b) After 7 cans of them are drunk, how many cans of drinks are left?

_____ ○ _____
 = _____
 _____ cans of drinks are left.



6. Mandy used 9  and 8 . Carson used 8  and 9 .

(a) The number of craft papers they each used are  the same / different .
 ( Circle the answer)

(b) How many blue craft papers did they use altogether?

_____ ○ _____
 = _____
 They used _____ blue craft papers altogether.

! Hints
 • Read the question and find the useful information.