




Exercise 1 – 15

Strand	Assessment Focus	Question	Mark
Number	<ul style="list-style-type: none"> ◆ Numbers up to 100 ◆ Counting onwards and backwards ◆ Odd and even numbers ◆ Order and quantity of objects ◆ Composition of numbers 2 to 18 ◆ Basic addition and subtraction ◆ Knowing 0 ◆ Units place and tens place ◆ Counting in groups of 2, 5 and 10 	1 – 20	/30
Measures	<ul style="list-style-type: none"> ◆ Length and distance 	21(a), 22 – 23	/4
Shape and Space	<ul style="list-style-type: none"> ◆ Positions 	21(b), 24 – 26	/8

Self-grading

32 – 42 marks 
 22 – 31 marks 
 0 – 21 marks 

1. Four 2-digit even numbers are arranged from the greatest to the smallest. Fill in the boxes with suitable numbers.

62 , , , 56
 (Greatest) (Smallest)



2. Write 'ninety-nine' in numerals: _____.

3. $7 + 5 =$ _____

4. $6 - 0 =$ _____

5. _____ $+ 5 = 5 + 9$



Connie divides the above  into two parts. Each part has not fewer than 6 . There is/are _____ different way(s) to divide them.

Marking record



1 Mark



1 Mark



1 Mark



1 Mark



1 Mark



1 Mark

7.

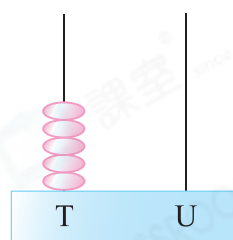


First

- (a) There is/are _____ penguin(s).
- (b) Penguin number 2 is the _____ one.
- (c) After penguin number 4 and 7 dived into the water, penguin number 9 is the _____ one in the queue.

8. In the number shown by the abacus on the right,


- (a) the digit in the units place is _____.
- (b) The digit in the tens place stands for _____.








9. Which of the following has the **greatest** result?

- A. $3 + 5$
- B. $10 - 6$
- C. $12 - 3$
- D. $8 + 4$

10.



- (a) There is/are _____  in the above picture.
- (b) After 8  are taken away, how many  are left? (Show your working)

_____  _____
 = _____
 _____  are left.



1 Mark



1 Mark



1 Mark



1 Mark



1 Mark



1 Mark



1 Mark



1 Mark




1 Mark

11. Follow the pattern and write the numbers in the boxes.

(a) 36, 37, , 39, 40,

(b) 10, , 30, 40, , 60

12.



(a) Count the fish in groups of 5, there is/are _____ five(s).


(b) There are _____ fish in the above picture.



13. 7 and _____ makes 16.

14. Mrs. Wong bought some . After 5 of them are used, 7 are left. How many  did she buy? (Show your working)


_____ _____

= _____

She bought _____ .

15. According to the picture, how many  are left after 5  got lost?

Answer: _____



16. Count backwards from \square , the fourth number is 69. \square is _____.



17. There are 4  and 8  in the tree. After _____ of them flew away, there are 4 birds left in the tree.



18.



Arrange the above number cards in order of counting onwards, which two numbers are missing?



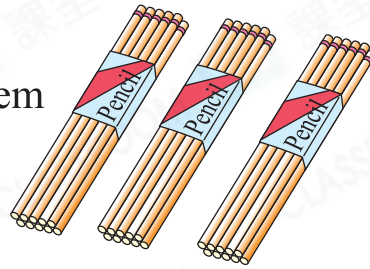
A. 31 and 33

B. 31 and 36

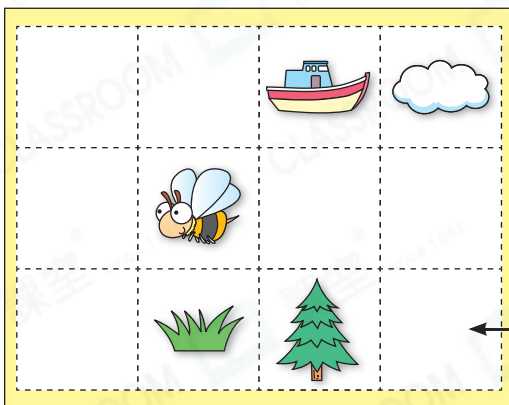
C. 29 and 31

D. 33 and 36

19. Shopkeeper packs the pencils on the right into packs of 5. He can pack them into _____ packs.




20.



← First box of the first row

The above picture is Rachel's sticker album.

(a)  is in the fourth box of the third row. Put a '□' in the picture to show that.




(b)  is in the _____ box of the _____ row.



(c) Rachel has 3 new stickers. She wants to put them into the same row. She can put them in the _____ row.



21.



(a) ☆ John / Sam / Ben is nearest to the finishing line.

(☆ Circle the answer)

(b) Mike is _____ Ben.



1 Mark



1 Mark

22.



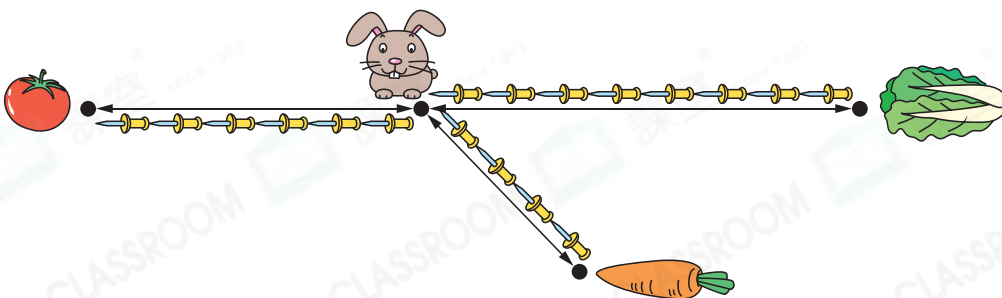
Compare the lengths of the three pencils above, which pencil is the longest?

Answer: Pencil _____



1 Mark

23.



(a) ☆ / / is nearest to .

(☆ Circle the answer)

(b) The distance between and is 9 .

☆ / / / is farthest from

now. (☆ Circle the answer)



1 Mark



1 Mark

24.



(a) ☆  /  /  (☆ Circle the answer) is in front of the queue.

1 Mark

(b) ☆  /  /  (☆ Circle the answer) is not between  and .

1 Mark

(c)  is _____ .

1 Mark

25. (a) How many flowers are there in the rightmost vase?

Answer: _____

(b) The empty vase is _____ the other two vases.



1 Mark

1 Mark

26.



(a) The teapot is _____ the books.

(b) On the upper level of the tea table, ☆ teapot / teacup / book (☆ circle the answer) is at the leftmost.

1 Mark

1 Mark



Check your work

- All questions finished
- Answers checked