

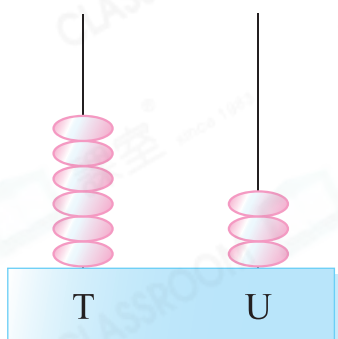
Analysis of Exam Questions

• Number Strand

1. Write an even number that is greater than 62 and smaller than 74.

Answer: _____

2.



In the number shown by the abacus,

- (a) '3' is in the _____ place.
 (b) The digit '6' stands for _____.

3.



Mrs. Lee bought the above . After half a dozen of them are eaten, how many are left?

_____ _____
 = _____
 _____ are left.

Scoring Key

- ⊗ '62' and '74' are not included.
- ⊗ Pay attention to the keywords 'even number'.

Scoring Key

- ⊗ Mind the spelling.
- ⊗ Pay attention to which place the number '6' is in.

Scoring Key

- ⊗ Count the number of .
- ⊗ Write the expression.
- ⊗ The number of left
 = bought - eaten

4. The table below shows the number of applicants of Technology Camp for the first three days.

	First day	Second day	Third day
Number of applicants	65	32	70

Arrange the number of applicants for the first three days from the greatest to the smallest.


Answer: _____, _____, _____
 (Greatest) (Smallest)

Scoring Key

⊕ Arrange as instructed.

• **Measures Strand**

- 5.



In the above picture,

- (a) podium ★ A / B / C is the shortest.
 (★ Circle the answer)
- (b) ★ Kay / Sam / Kim is the shortest.
 (★ Circle the answer)

Scoring Key

⊕ Pay attention to the keyword 'shortest'.

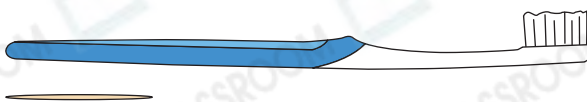
Scoring Key

⊕ They have the same height on the podium.

⊕ The higher the podium is, the shorter the height of the kid is.

6. toothbrush

toothpick



The length of toothbrush in the above picture equals to the length of _____ toothpick(s).

Scoring Key

⊕ Draw toothpick(s) of the same length to get the answer.

7.

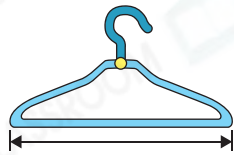


Scoring Key

⊗ Improved unit should not be longer than the length of the mobile phone.

Which of the following is most suitable for measuring the length of the mobile phone?

A.



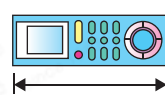
B.



C.



D.








Shape and Space Strand

8. Mandy put 7 photos on the wall.



(a)  is _____ .

(b)  is _____ .

(c)  /  /  is/are between  and .

(★ Circle the answer)

Scoring Key

⊗ Describe the relative positions of the photos at your viewpoint.