

Quiz I (1A Mathematics)

Name :

Date :

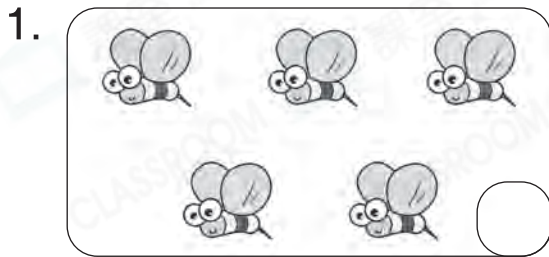
Class : ()

Mark : /18

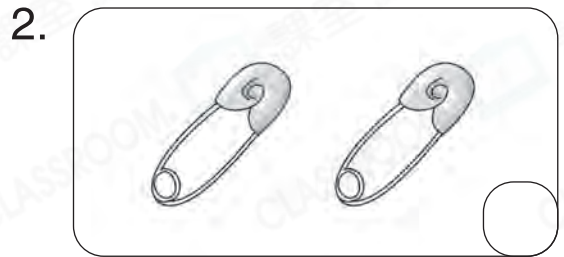
Time limit : 15 minutes

(Syllabus: Exercise 1 – 5)


I. Count and fill in the boxes. Then circle the answers. (8 marks)



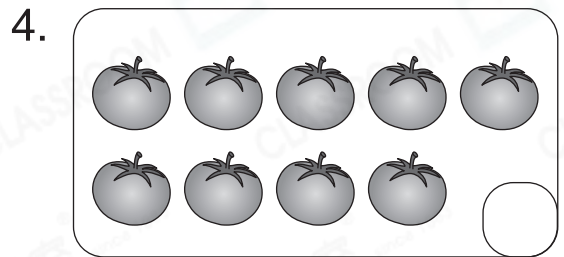
(odd / even) number



(odd / even) number



(odd / even) number



(odd / even) number

II. Fill in the blanks. (4 marks)

1. Write all even numbers between 9 and 15.


2. Count backwards from 14 to 5.

--	--	--	--	--	--	--	--	--	--


III. Fill in the blanks with ordinal numbers. (2 marks)




1.  is the _____ one.



2.  is the _____ one.

IV. Circle the answers. (4 marks)




( / ) is on the top.






( / ) is at the back.



 is on the (left / right).



( /  / ) is between the other two balls.