

Quiz II (1A Mathematics)

Name :

Date :


Class : ()

Mark : /13

Time limit : 15 minutes

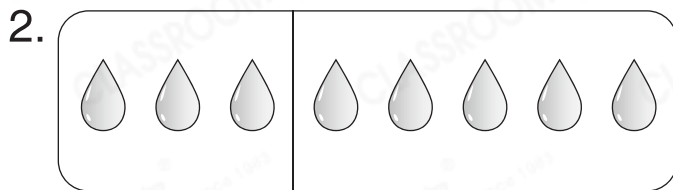
(Syllabus: Exercise 6 – 8)

I. Look at the pictures and fill in the blanks. (4 marks)



1 and 3 is _____.


$1 + 3 = \underline{\hspace{2cm}}$




8 can be split into

_____ and 5.

$8 - \underline{\hspace{2cm}} = 5$

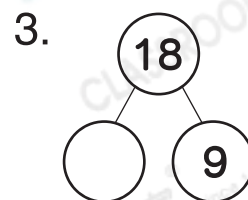
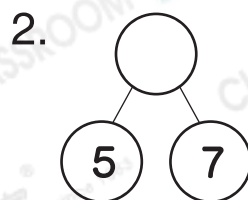
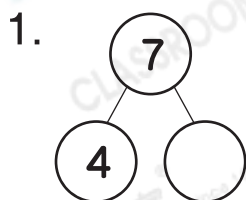


$13 - \underline{\hspace{2cm}} = 6$



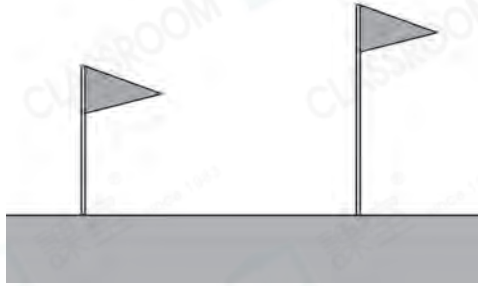
_____ + 9 = 17

II. Fill in the blanks. (3 marks)



III. Circle the answers. (4 marks)

1. The taller one



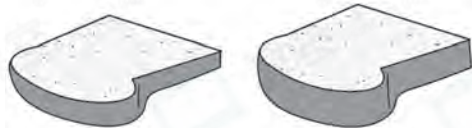
2. The narrower one



3. The shorter one




4. The thicker one



IV. Fill in the blanks. (2 marks)

1. Brush _____ is nearest to



. The distance between

them is _____ .

2. Brush _____ is farthest from



. The distance between

them is _____ .

