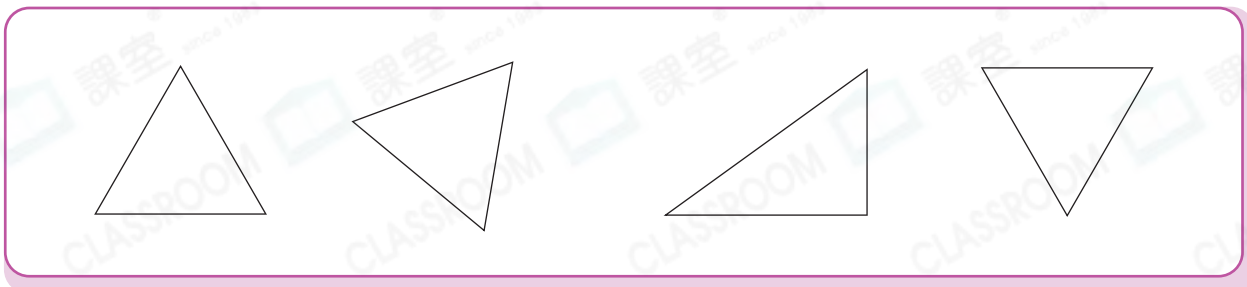


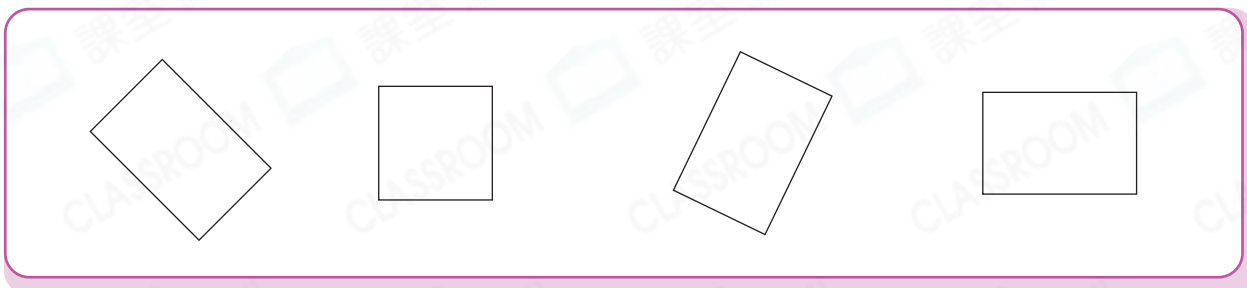


Circle the shapes that are different from the others.

1.

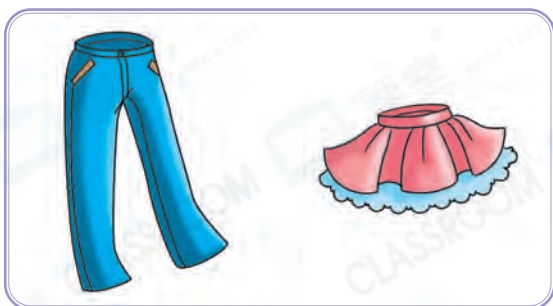


2.




Circle the answers according to the instructions.

3. The shorter one



4. The heavier one



5. The shorter one



6. The farther one





Match the numbers.

7.



8.



9.



10.




Which of the following objects are in pairs? Circle them.


11.



Fill in the blanks according to the picture.



Pig



Elephant



Bird



Cat

12. The shortest animal is the _____.

13. The animal taller than the cat but shorter than the elephant is the _____.

14. Put the animals from the shortest to the tallest. Which animal is the last one?

Answer: The _____