

Quiz IV (1A Mathematics)

Name : _____

Date : _____

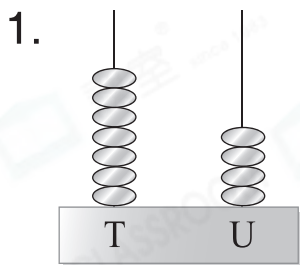
Class : _____ ()

Mark : _____ /20

Time limit : 15 minutes

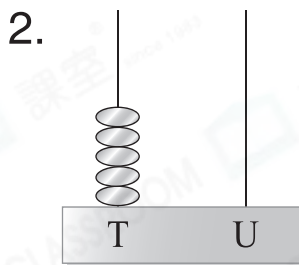
(Syllabus: Exercise 13 – 15)

I. Fill in the blanks. (8 marks)



In numerals: _____

In words: _____



In numerals: _____

In words: _____



'3' is in the _____ place.

It stands for _____.



'4' is in the _____ place.

It stands for _____.

II. Circle the answers. (2 marks)

1. Odd number greater than 30.



2. Even number within 50.




III. Circle the figures according to the instructions and fill in the blanks. (6 marks)

1. Circle in groups of 2. There are _____ .



2. Circle in groups of 5. There are _____ .



3. Circle in groups of 10. There are _____ .



IV. Follow the pattern and fill in the boxes. (4 marks)

1.

65			62	61			58
----	--	--	----	----	--	--	----

2.

24	26					36	
----	----	--	--	--	--	----	--