

4

Odd and Even Numbers




Date: _____

Mark: _____



Count and fill in the blanks. Then circle the answers.

1.



_____ fish

(odd / even) number

2.



_____ mushroom(s)

(odd / even) number

3.

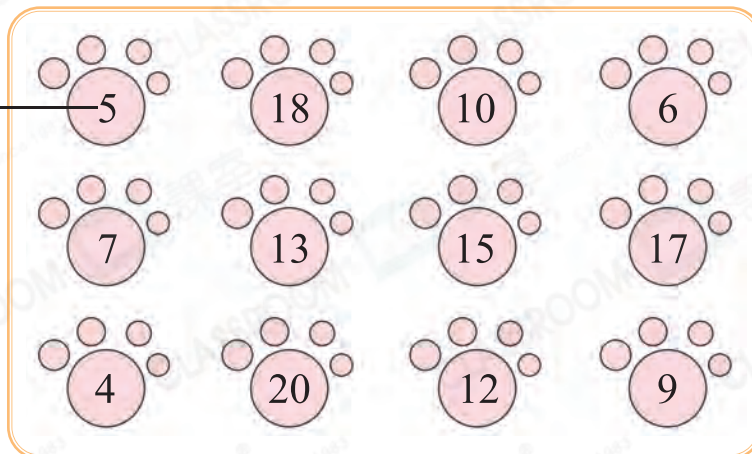


_____ bee(s)

(odd / even) number



Fill in the blank and draw a line according to the instruction.



4. There is/are _____ even number(s) in the above picture.

5. Draw a route to find the bone for the dog by connecting odd numbers.

6. Which of the following is **not** an even number?

A. 20

B. 16

C. 14

D. 11

7. Circle all odd numbers that are smaller than 13.



8. Which of the following is an even number greater than 11 but smaller than 15?

A. 10

B. 11

C. 12

D. 13

9.



(a) The number of gifts is an odd / even number.

(Circle the answer)

(b) After at least _____ gift(s) is/are sent, the number of gifts left will be an even number.

10. How many odd numbers are there from 5 to 15?

Answer: _____

Scoring Key



Pay attention to the words 'odd number'.

5 and 15 should be counted.

11.



(a) There are _____  in the above picture.

(b) After 2  are added, the total number of  is an odd / even number. (Circle the answer)