

8

Directions



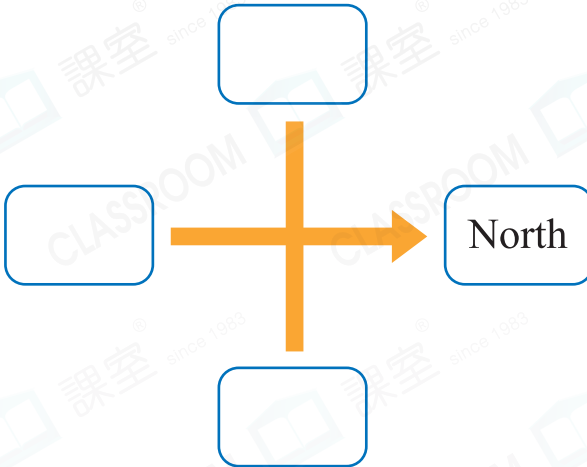
Date: _____

Mark: _____

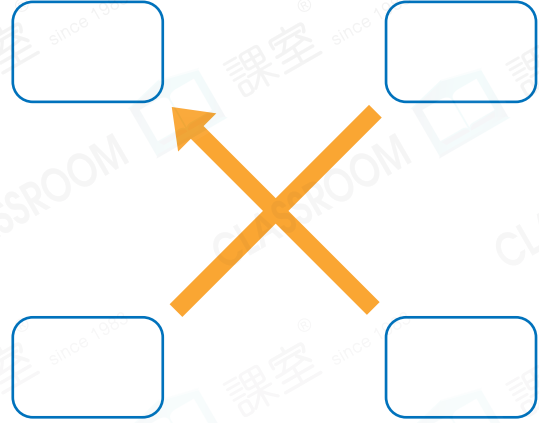


Write directions in the boxes.

1.



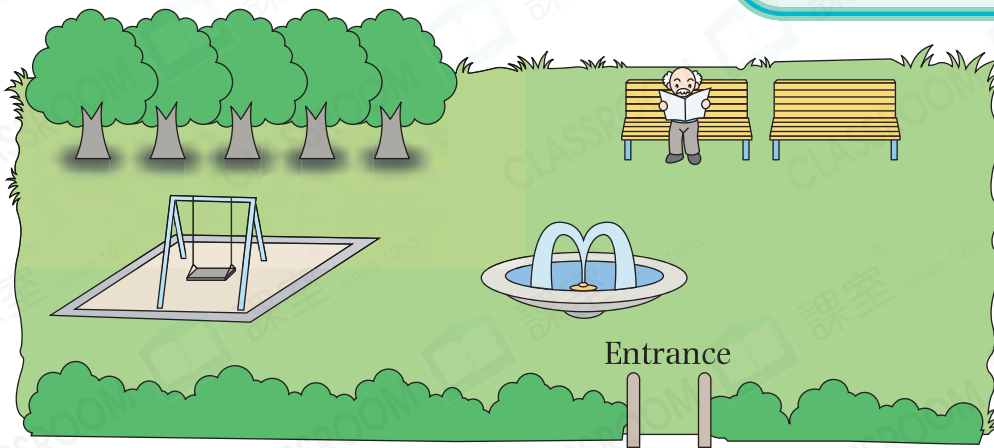
2.



Answer the following questions.

STEM Education **pedia**

Polaris is the star closest to due north. It's one of the important ways for people to identify directions.



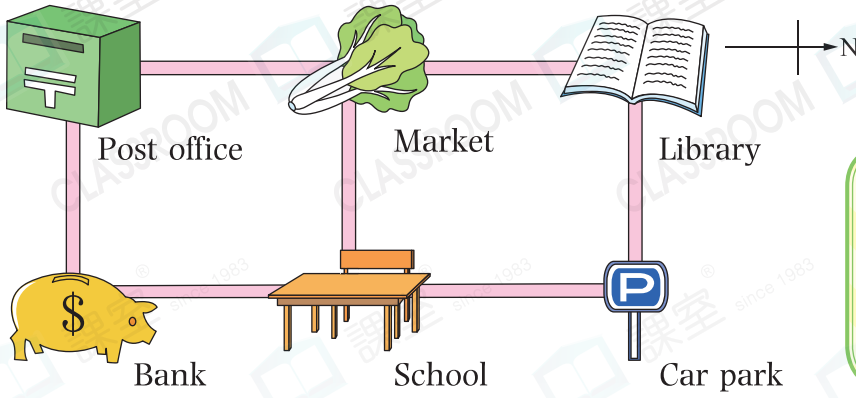
- The old man sits facing the direction of sunrise. He sits to the _____ of the entrance.
- The trees are to the _____ of the old man.
- The swing is to the _____ of the trees.
- The fountain is to the _____ of the swing.



Reminder

Sun rises in the east and sets in the west.

7.

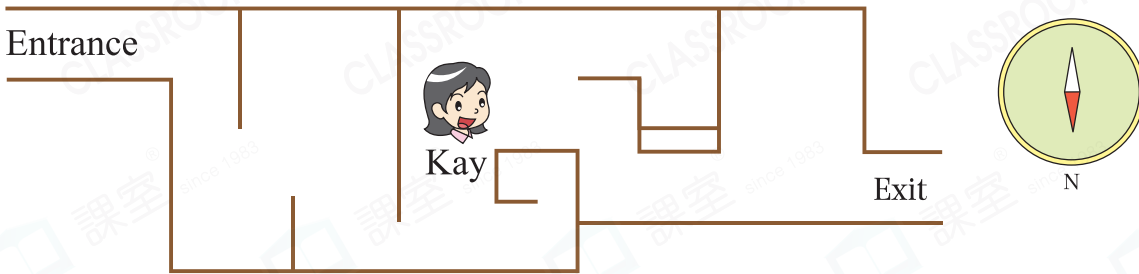


Scoring Key

- ① Find the other three directions correctly.
- ② Move the compass sign to suitable position.

- (a) Bank is to the _____ of the school.
- (b) Sally goes west from the car park to the _____.
- (c) Zoe goes to school from the post office. She should go _____ to the _____ first, then turn _____ to reach school.

8.



How should Kay get to the exit?

Answer: She should go ★ east / south / west / north first, then turn to

★ east / south / west / north . Finally, she should turn

★ east / south / west / north to get to the exit.

(★ Circle the answers)

Advanced

9. In the picture on the right, Luke is going south. When he reaches the junction, Max walks to him from his left. Which direction is Max going?

- A. East
- B. South
- C. West
- D. North

