



Date: _____

Mark: _____



Put a '✓' in the if the statement is correct and put a '✗' if it is wrong.

1. Each day is divided into morning and afternoon.

2. There are 12 hours in one day.

3. Morning is from 6:00 a.m. to 1:00 p.m.

4. Afternoon is from 12:00 noon to 12:00 midnight.

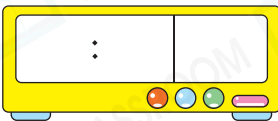
STEAM
EDUCATION **pedia**

In the ancient China, people divided one day into 12 Shi and name them according to the order of Chinese zodiac. Each Shi is equivalent to 2 hours nowadays.

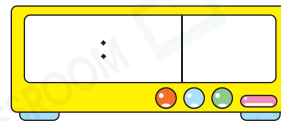


Write the time on each clock.

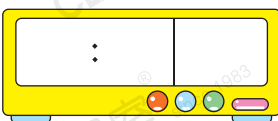
5. Seven ten in the morning



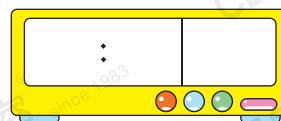
6. Half past 7 in the morning



7. Three fifty in the afternoon

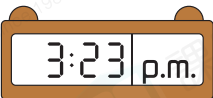


8. Eight o-five in the afternoon



9. Kyle got into library at  .

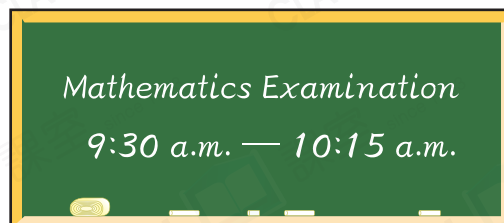
(a) Kyle got into library at _____ minute(s) to _____ in the
 ☆ morning / afternoon . (☆ Circle the answer)

(b) Kyle left the library at  . He stayed in the library for
 _____ minutes.

10.



The time now is nine fifty-two.




(a) Time limit for Mathematics examination is _____ minutes.
 (b) The examination has _____ minute(s) left.

11. The table below shows the schedule of Christmas Celebration.

Programme	Party	Singing Contest	Drama Contest	Lucky Draw
Starting time	11:00 a.m.	12:30 a.m.	1:15 p.m.	2:00 p.m.

(a) The time is _____ : _____ p.m. shown on the right. Singing contest will start after _____ minute(s).



(b) _____ will be in progress when the time is 1:20 p.m. (Give the programme name)

 12.

The first ferry departs at 6:30 a.m. every day and the ferry departs every 8 minutes. Miss Lee arrives at the harbour at 3 minutes past 7 in the morning. She needs to wait at least _____ minute(s) to take the next ferry.