

2

Counting in Groups of 20, 25, 50 and 100




Date: _____


Mark: _____



Fill in the blanks.

1. 
 50 → 100 → → →

There are _____ toothpicks in the above picture.

2. 
 100 → → → →

There are _____ craft papers in the above picture.




Estimate and fill in the blanks.

3. In the figure on the right,

(a) there are about _____ in each box. There are _____ box(es).

(b) There are about _____ in total.



4. There are 4 colours in a pack of sticky notes and about 25 sticky notes for each colour. How many sticky notes are there in the pack?

(a) Estimation: 25, 50, _____, _____

(b) There are about _____ sticky notes in the pack.

5. Miss Wong bought 3 boxes of clips.
There are _____ clips altogether.



6. This boy saved _____ dollars from January to August.



I save 20 dollars every month.

7. _____ groups of 50 are 250.


8. The convenient store bought several boxes of instant noodles. Which of the following **cannot** be the quantity of instant noodles purchased?



- A. 100 packs B. 150 packs
 C. 180 packs D. 200 packs

9. Cindy has 4 bags of lucky stars. Each bag contains 50 lucky stars. She puts every 100 lucky stars into one jar. She needs at least _____ jar(s).

10.



Red: 100 points Yellow: 50 points
Blue: 25 points Black: 20 points

- (a) All arrows shot by Karen hit the black part. She got 100 points altogether. She shot _____ arrow(s).



Advanced

- (b) All 3 arrows shot by Dan hit the yellow part. Who got more points, Karen or Dan? Why?

Answer: Because _____

★ Karen / Dan (★ circle the answer) got more points.