

7

Problems Related to Time







Date: _____

Mark: _____



The clocks in the table below shows the starting and finishing times of some activities on the same day. Fill in the blanks with the correct answers.

	Starting time	Duration	Finishing time
1.		2 hours	_____ : _____ in the _____
2.		_____ hours	
3.	_____ : _____ in the _____	50 minutes	



Look at the figure below and answer the questions.

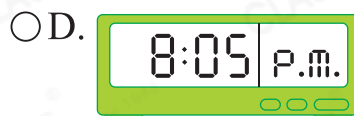
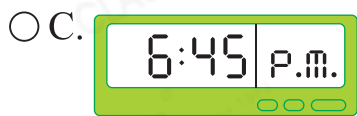
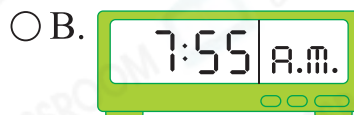
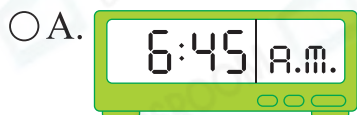
Show time of Ocean Adventure	
	Starting time
First show	12:00 noon
Second show	2:30 p.m.
Third show	4:00 p.m.
Fourth show	5:30 p.m.

- There are _____ hours between the starting times of the first and third shows.
- Each show lasts for 20 minutes. The second show will end at _____ : _____ in the _____.
- It is 5:47 p.m. now. The fourth show has been on stage for _____ minutes.

7. The clock shows the time when Nick started having lunch. Nick arrived at school 4 hours before. He arrived at school at _____ : _____ in the _____ .



8. Christy arrived at the church at 7:20 p.m. and Sam arrived 35 minutes earlier than her. Which of the following shows the time when Sam arrived at church?



9. Dad woke up at 7:30 a.m. this morning. He slept for 8 hours. The time he fell asleep was _____ : _____ in the _____ .

10.



The opening hours of a clinic is shown above.

(a) The clinic opens for _____ hours a day.

(b) Ms Chan arrives at the clinic at 7:52 a.m. She has to wait for at least _____ minutes to see a doctor.

11.

Flight number	TJ733	LM365	HD490	LB117
Departure time	10:55 a.m.	12:25 p.m.	2:08 p.m.	3:35 p.m.

The flight schedule from Hong Kong to Beijing is shown above.

(a) The flight TJ733 will arrive at Beijing at 1:55 p.m. It will travel for _____ hours.

(b) John goes to Beijing for a trip. He leaves his company at noon and arrives at the airport 48 minutes later. The earliest flight that he can take is _____ . (Fill in the flight number)