




Date: _____

Mark: _____




Circle the heavier objects.

1.



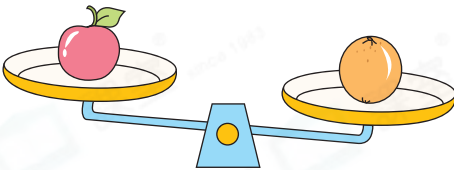
(Cup / Balloon)

2.



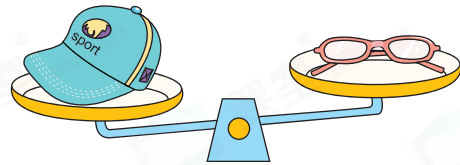
(Clock / Watch)

3.



(Apple / Orange)



4.



(Cap / Glasses)



Fill in the blanks.



5. A glue stick weighs _____ marbles.
6. A roll of tape weighs _____ marbles.
7. Arrange the following objects from the lightest to the heaviest. (Write the letters for the answer)

P. A glue stick

Q. A roll of tape

R. A marble

Answer: _____, _____, _____
 (Lightest) (Heaviest)

Blue whales are the heaviest animals existing. One blue whale weighs about the same as 25 African elephants, which are the heaviest terrestrial animals.

8. Which of the following objects is the heaviest?

A. A leaf



B. A piece of paper



C. A backpack



D. A pair of socks



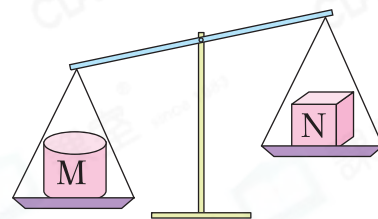
9. Look at the balance on the right. Which of the following descriptions is correct?

A. M is heavier than N.


B. M is lighter than N.

C. M and N have the same weight.

D. We cannot compare the weights of M and N.





10.



Scoring Key

⊕ Taking same objects away from each side of the balance, the two sides still remain balanced.

Look at the above balance, the two sides are balanced now. How many  does one  weigh?

Answer: _____

11.



Look at the above figures. Which of the following is correct?

A.  is heavier than .

B.  and  have the same weight.

C.  and  have the same weight.

D.  is lighter than .