




Date: _____

Mark: _____



Write down the weights of the following objects with units.

1.



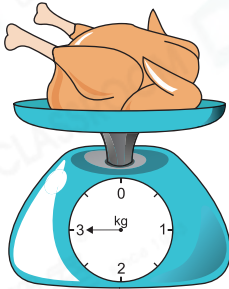


Reminder


Gram(g) and kilogram(kg) are units of weight.

1 kg = 1000 g

2.



3.





Estimate the weights of the following objects. Put a '✓' in the .

4.



50 g



500 g

5.

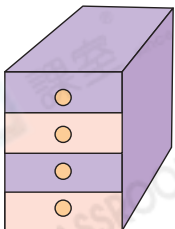


1 kg



100 g

6.



10 kg



100 kg

7.

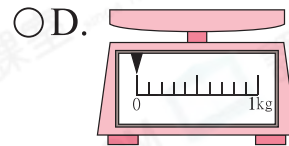
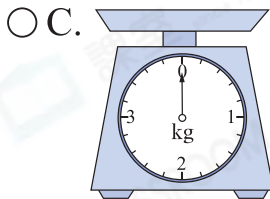
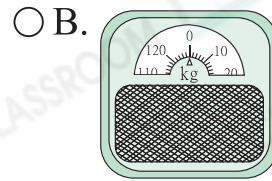



300 g




3000 g

8. Which of the following tools is the most suitable for measuring Mary's weight?


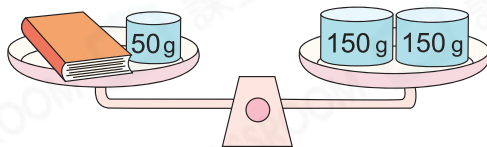


9. The weight of may be

- A. 2 kg.
○ B. 3 kg.
○ C. 4 kg.
○ D. 5 kg.



10.



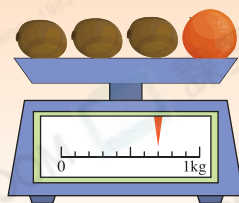
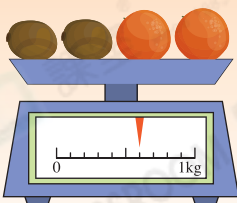
(a) A book weighs _____ g.

(b) A cup is _____ g heavier / lighter than the book.
(Circle the answer)

Brain Quest



Detailed tips



According to the above figure, what is the weight of a ?

Answer: _____ g