



Date: \_\_\_\_\_

Mark: \_\_\_\_\_



Express the time shown on the following clocks in '12-hour time'.

1.



\_\_\_\_\_ : \_\_\_\_\_ ( a.m. / p.m. )

2.



\_\_\_\_\_ : \_\_\_\_\_ ( a.m. / p.m. )

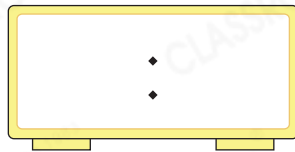


Express the given time in '24-hour time' by writing numbers on the clocks.

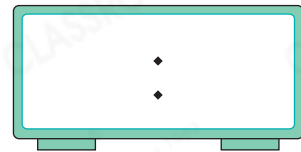
3. 9:30 in the morning



4. 8:26 p.m.



5. 5:47 in the afternoon



Write numbers on the clock in '24-hour time' to show the time and fill in the blanks with numbers to show the time in '12-hour time'.

6.



09 : 50

\_\_\_\_\_ : \_\_\_\_\_

4 hours pass




7.



\_\_\_\_\_ : \_\_\_\_\_

8.

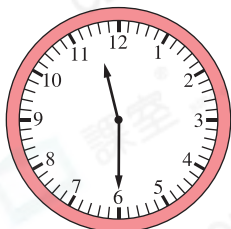


45 minutes pass



\_\_\_\_\_ : \_\_\_\_\_

9. The clocks below show the starting time and finishing time of a mathematics tournament. The tournament started in the morning and ended in the afternoon. Express the starting time and finishing time in '24-hour time'.



Starting time



Finishing time

### Mathematics Tournament

Starting time

:

Finishing time

:

10. Table on the right shows the circus show time.

(a) The 1<sup>st</sup> show started at \_\_\_\_\_ : \_\_\_\_\_

☆ a.m. / p.m. (☆ Circle the answer)

(b) James arrived at the venue at 5:06 p.m.

He could watch the \_\_\_\_\_ show.

	Show time
1 <sup>st</sup> show	10:05 – 10:35
2 <sup>nd</sup> show	12:30 – 13:00
3 <sup>rd</sup> show	15:10 – 15:40
4 <sup>th</sup> show	17:40 – 18:10

- 11.

### Museum Opening Hours

Monday, Wednesday to Friday 10:00–18:00

Saturday, Sunday and Public holidays 10:00–19:00

Tuesday Closed

There are 24 time zones by convention. Times in adjacent time zones differ by one hour.

(a) The museum opens for \_\_\_\_\_ hours on Thursday.

(b) Last Saturday, Sean left the museum 34 minutes before the museum closed.

In '24-hour time', his leaving time was \_\_\_\_\_ : \_\_\_\_\_.

### Brain Quest



Detailed tips

Beijing time is 1 hour behind Tokyo time. Edan went to Tokyo for work and Jane dialed him at 8:00 p.m. (Beijing time). They talked for 25 minutes. In '24-hour time', the phone call ended at \_\_\_\_\_ : \_\_\_\_\_ (Tokyo time).