

# Quiz IV (3A Mathematics)

Name : \_\_\_\_\_

Date : \_\_\_\_\_

Class : \_\_\_\_\_ ( )

Mark : \_\_\_\_\_ /11

Time limit : 15 minutes

(Syllabus: Exercise 13 – 16)

## I. Express the time shown on the following clocks in '24-hour time'. (2 marks)

1.



\_\_\_\_\_ : \_\_\_\_\_

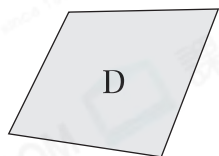
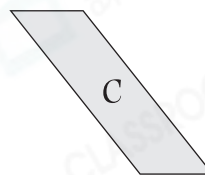
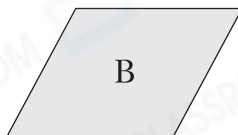

2.



\_\_\_\_\_ : \_\_\_\_\_

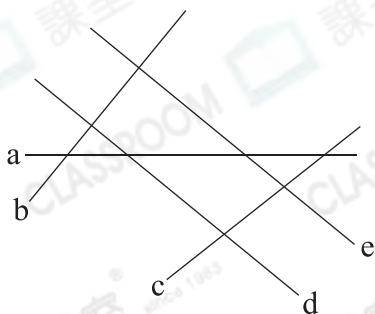
## II. Answer the following questions. (6 marks)

1.



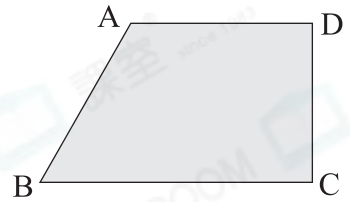
Among the above figures, ★ \_\_\_\_\_ and \_\_\_\_\_ (★ write the letters for the answers) are parallelograms.


2.




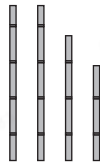
In the figure on the left, line \_\_\_\_\_ and line \_\_\_\_\_ are a pair of parallel lines.

3. The figure on the right is a \_\_\_\_\_ .  
It has \_\_\_\_\_ pair(s) of parallel lines.



4.  If we cut the rectangle on the left along the dotted line, we will have \_\_\_\_\_ (number) \_\_\_\_\_ (shape).

5. Circle the set of sticks that can form a parallelogram.



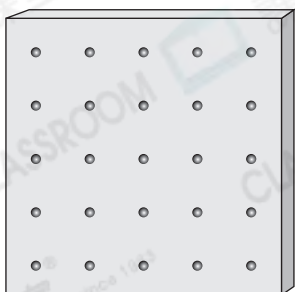
### III. Draw as required. (3 marks)

1. Draw a pair of parallel lines on the grid.



2. Draw the required shapes on the pin-boards below.

(a) Trapezium



(b) Parallelogram

