

# 2

## Kilometre



Date: \_\_\_\_\_

Mark: \_\_\_\_\_



Fill in the following blanks with suitable units of lengths.

1. A building is about 120 \_\_\_\_\_ tall.
2. Yangtze River is around 6300 \_\_\_\_\_ long.
3. A highway is about 36 \_\_\_\_\_ long.
4. A walking trail is about 2 \_\_\_\_\_ long.

**STEM** **Education** **pedia**

Although the Great Wall is about 7350 km long, its width is less than 10 m. It is not possible to see this 'line' from the space.

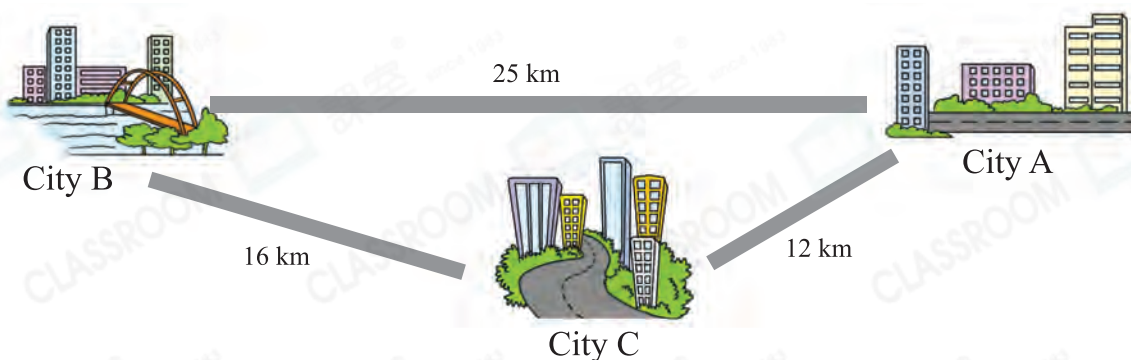


Fill in the blanks.

5. 2 kilometres = \_\_\_\_\_ metres
6. 30000 m = \_\_\_\_\_ km
7. 4 km and 500 m = \_\_\_\_\_ m
8. 6 km 80 m = \_\_\_\_\_ m



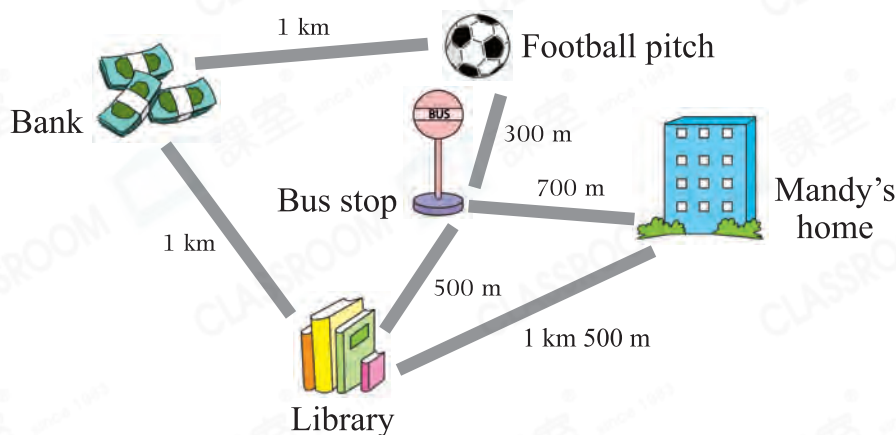
Look at the picture below and answer the following questions.



9. Among the three cities, City \_\_\_\_\_ and City \_\_\_\_\_ are farthest away from each other.
10. Joe drove from City A to City B through City C. He travelled \_\_\_\_\_ km.
11. Carl drove from City A to City B directly. He travelled \_\_\_\_\_ km less than Joe did.

12. Which of the following is most suitable to be measured by 'kilometre'?
- A. The height of Victoria Peak.
  - B. The length of a train.
  - C. The distance between Tuen Mun and Tsim Sha Tsui.
  - D. The length of one lap of a track.
13. The length of Cross-Harbour Tunnel is around 2 km and that of Tai Lam Tunnel is about 3800 m. ☆ Cross-Harbour Tunnel / Tai Lam Tunnel is longer.  
(☆ Circle the answer)

14.



- (a) \_\_\_\_\_ is the closest to the bus stop.
- (b) Jones walked from the football pitch to the library through the bus stop. He needed to walk \_\_\_\_\_ m.
- (c) Mandy went to the bank from her home. She needed to walk \_\_\_\_\_ m at least.

Scoring Key

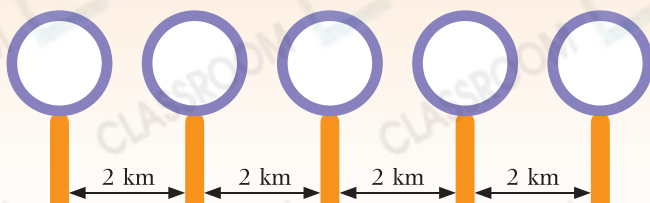
Find all routes from home to the bank first.

Brain Quest



Detailed tips

A route map of 5 bus stops is shown below. The distance between each two adjacent stops is 2 km. Mark the bus stops with A, B, C, D, and E according to the conditions on the right.



Conditions:

- ① A and B are 6 km apart.
- ② B and E are 2 km apart.
- ③ A and D are 4 km apart.
- ④ C and E are 6 km apart.