

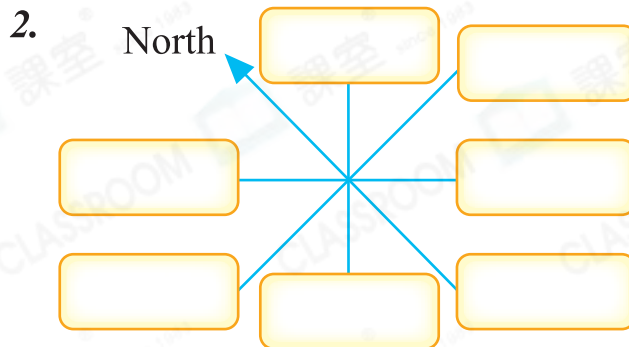
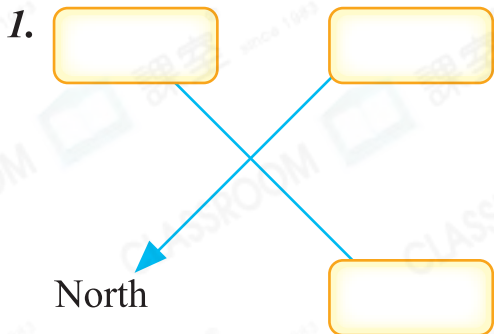


Date: _____

Mark: _____



Write the directions in the boxes.



Answer the following according to the map.

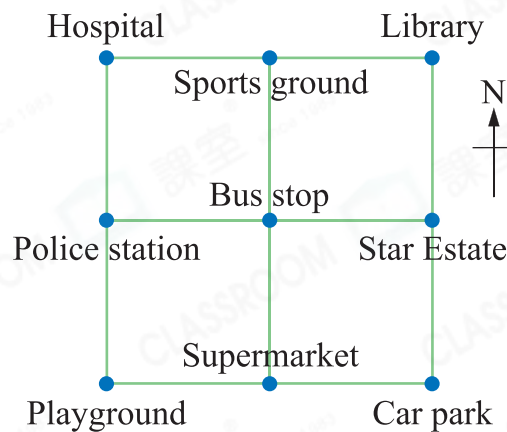
3. The sports ground is to the _____ of the bus stop.

4. The Star Estate is to the _____ of the police station.

5. The bus stop is to the _____ of the hospital.

6. The playground is to the _____ of the library.

7. The police station is to the northwest of the _____.




Write the name of person in boxes on the right according to the informations.

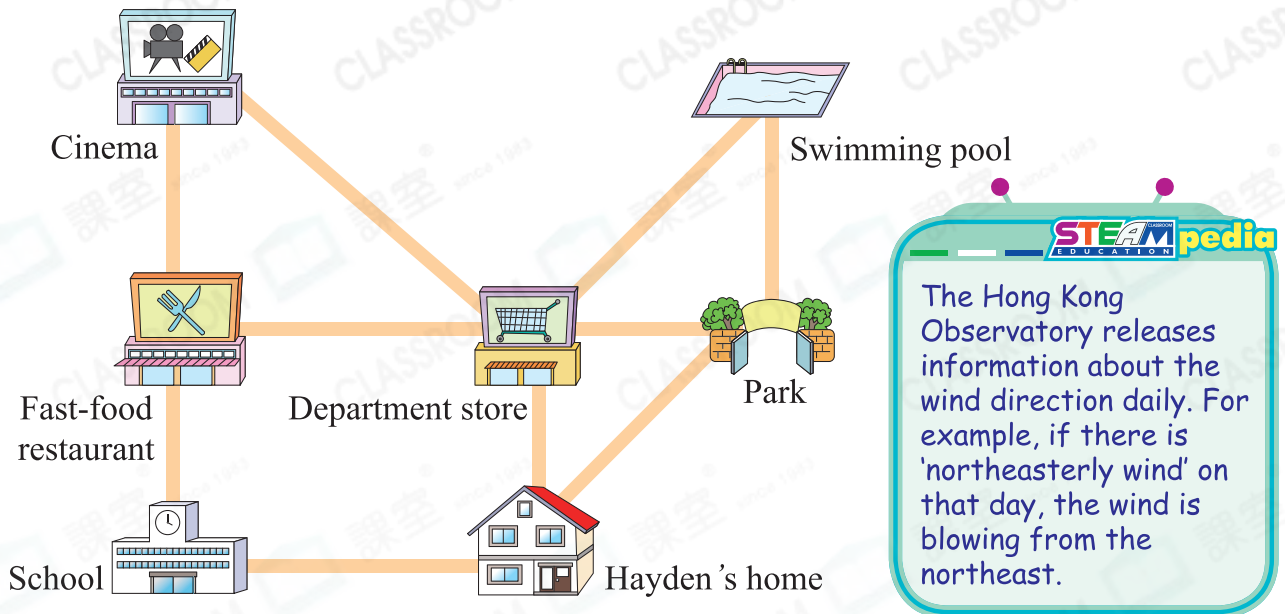
8. Yuki is to the north of Lydia.

9. Chris is to the east of Lydia.

10. Henry is to the southwest of Yuki and to the west of Chris.



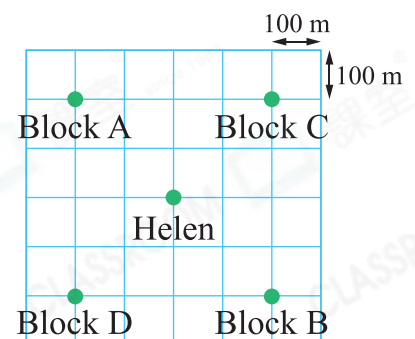
11. The figure below is a map of the surroundings of Hayden's home. The cinema is to the east of the department store.



- (a) The park is to the _____ of the fast-food restaurant.
- (b) The fast-food restaurant is to the northwest of the _____.
- (c) Hayden sets off from home to the swimming pool. He should go _____ to the _____ first, then turn _____ to reach the swimming pool.

12. The map of Happy Court is shown on the right. Block B is to the northeast of block C.

- (a) Helen wants to go to block D. She should walk towards _____.
- (b) After arriving at block D, Helen walks 200 m towards southwest, then 300 m towards northwest. Put a '×' in the map to show the location of Helen.



13. After turning right by one right angle, Lily is facing northeast. She was facing _____ originally.

- Advanced** 14. Mrs Cheung drove towards east for 4 km, then she turned south and drove for 4 km. If she wants to take the shortest journey back to the starting point, she should drive towards _____.